
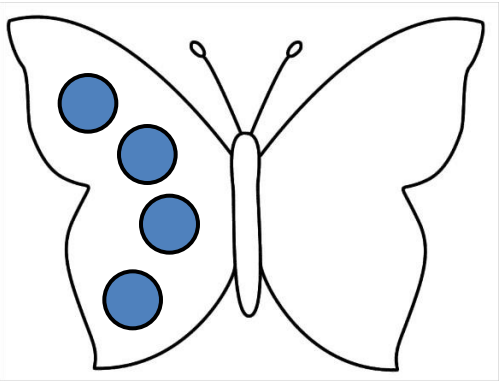


Count how many spots on are the butterfly's wing then copy them onto the other wing. Can you work out the double number and write a number sentence?



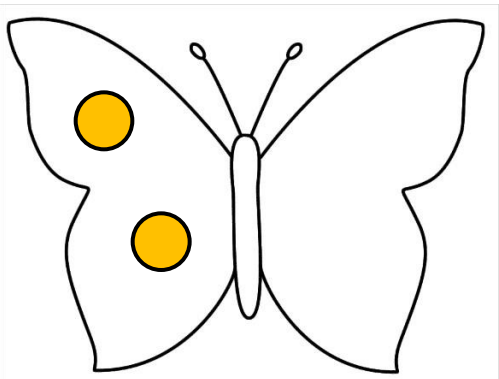
$$3 + 3 = 6$$

Double 3 is 6



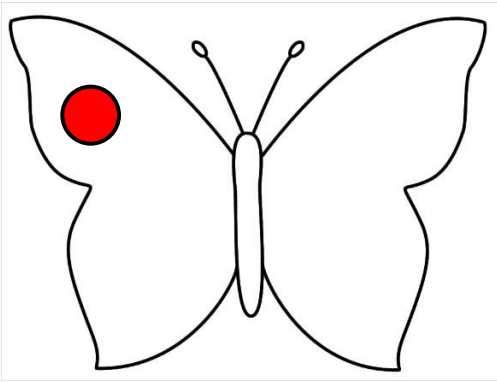
$$\underline{\quad} + \underline{\quad} = \underline{\quad}$$

Double  $\underline{\quad}$  is  $\underline{\quad}$

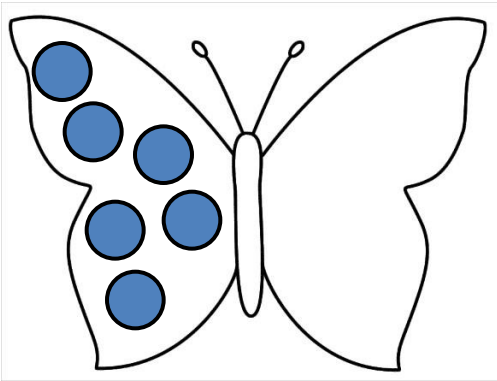


$$\underline{\quad} + \underline{\quad} = \underline{\quad}$$


Double  $\underline{\quad}$  is  $\underline{\quad}$



     +      =       
Double      is     



     +      =       
Double      is     



     +      =       
Double      is