

Look at the socks, can you match them to their partner to make a pair? Count them in 2s. These are all even numbers.



2 4 6 8 10 12 14 16 18 20

Is there a sock left over? It's an odd sock! That means you have got an odd number of socks. These are all odd numbers.



1 3 5 7 9 11 13 15 17 19

















Teacher's slide