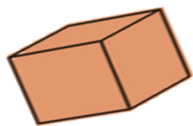


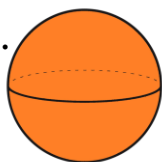
# Sort 3D Shapes

4. Circle the cuboids below.

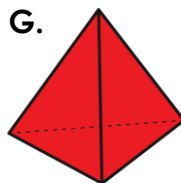
A.



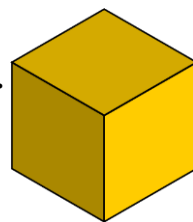
D.



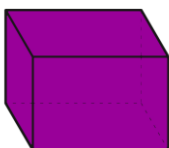
G.



H.



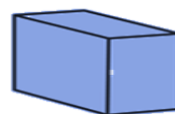
B.




F.



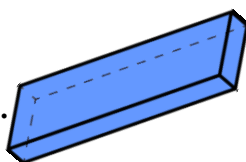
I.



C.



E.



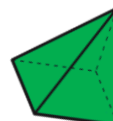
VF  
HW/Ext

5. Match the same 3D shapes together.

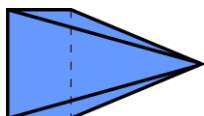
A.



1.




B.



2.



C.



3.



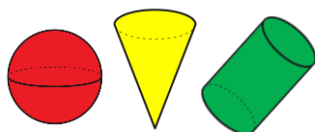
VF  
HW/Ext

6. Jess and Max are sorting shapes.



Jess

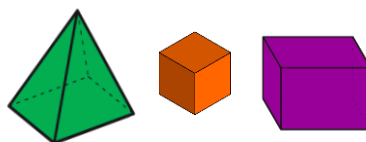
I have shapes with curved faces. Max has shapes with flat faces.



I have shapes with curved faces. Jess has shapes with flat faces.



Max



Who is correct? Explain your answer.



RPS  
HW/Ext