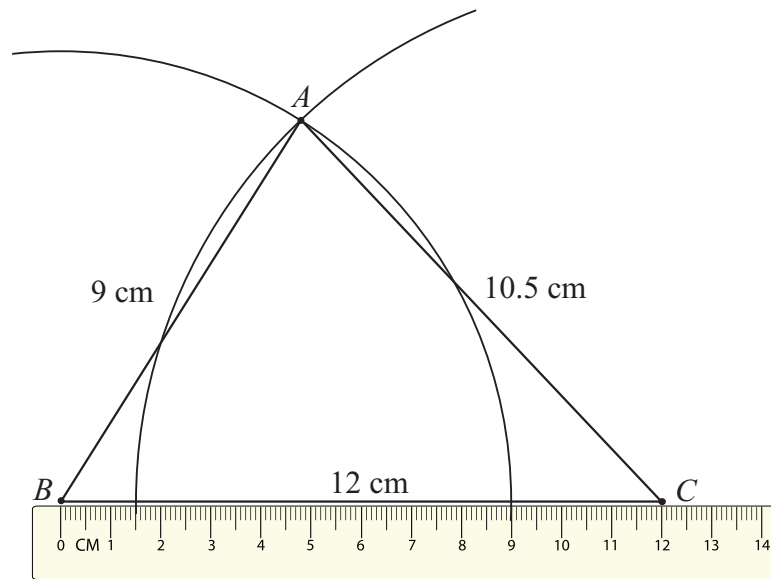


## SAMPLE PAPER 5: PAPER 2

### QUESTION 6 (25 MARKS)

#### Question 6 (a)



Rule out a line  $[BC]$  of length 12 cm.

Using a compass, draw an arc of length 9 cm with  $B$  as centre.

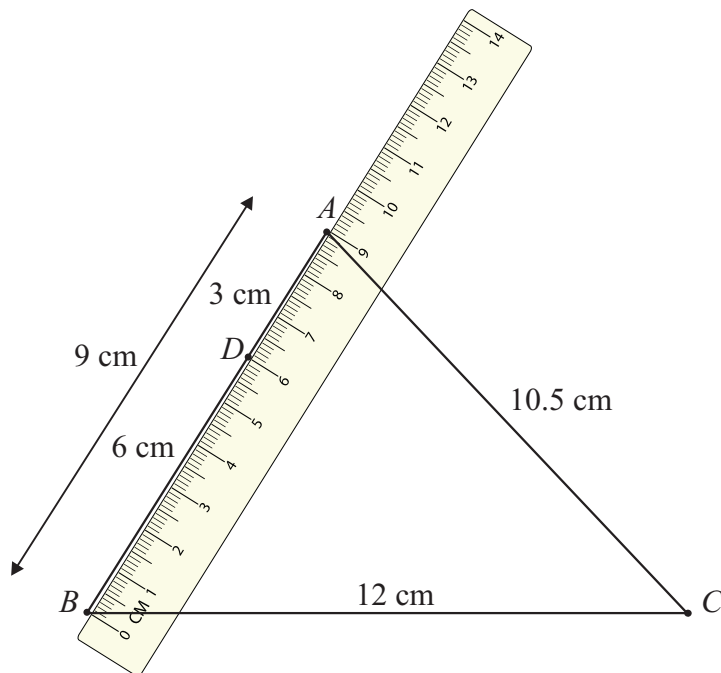
Using a compass, draw an arc of length 10.5 cm with  $C$  as centre.

$A$  is the point of intersection of these arcs.

Join  $B$  to  $A$  and  $C$  to  $A$  to complete the construction.

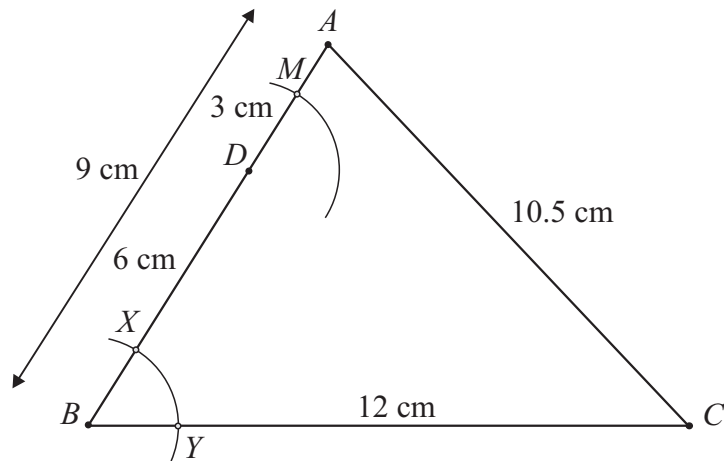
#### Question 6 (b)

**STEP 1:** Measure out a line segment  $[BD]$  of length 6 cm.

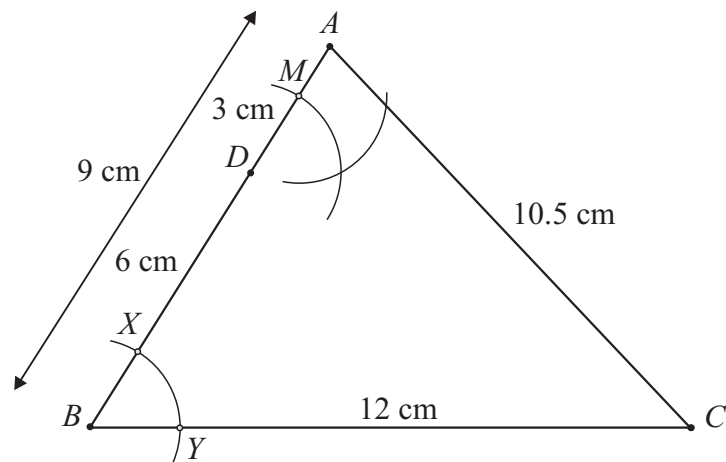


**STEP 2:** Using a compass, draw an arc  $XY$  with  $B$  as centre.

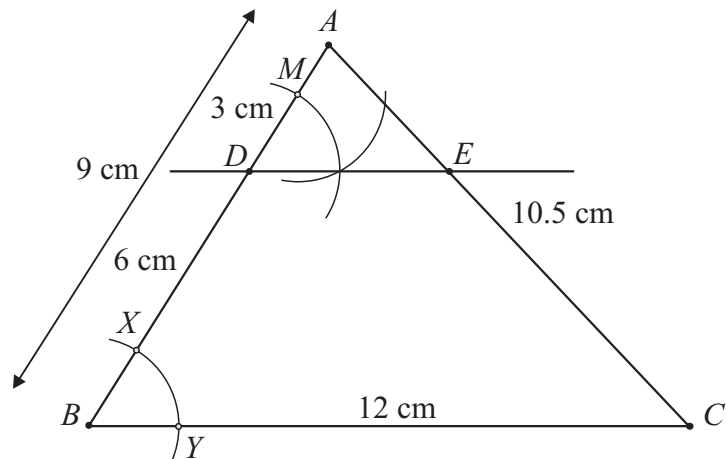
Without changing the radius of the compass, draw another arc with  $D$  as centre.



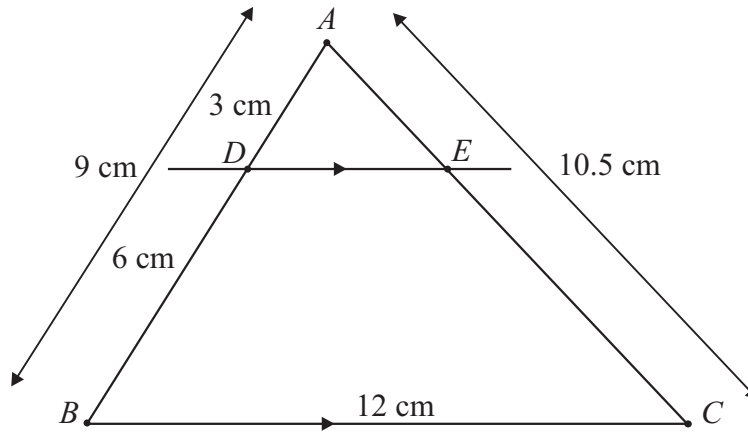
**STEP 3:** Place the point of the compass on  $X$  and stretch it to  $Y$ , so that it has a radius of length  $|XY|$ . Without changing the radius of the compass, draw an arc with centre  $M$ .



**STEP 4:** Draw a line through  $D$  and through the intersection of the arcs. The line  $DE$  is parallel to  $BC$ .



**Theorem 12.** Let  $\triangle ABC$  be a triangle. If a line  $l$  is parallel to  $BC$  and cuts  $[AB]$  in the ratio  $s:t$ , then it also cuts  $[AC]$  in the same ratio.



$$\frac{|AB|}{|AD|} = \frac{|AC|}{|AE|} \Rightarrow \frac{9}{3} = \frac{10.5}{|AE|}$$

$$\therefore |AE| = \frac{3 \times 10.5}{9} = 3.5 \text{ cm}$$

$$|AE| + |EC| = 10.5$$

$$\therefore |EC| = 10.5 - 3.5 = 7 \text{ cm}$$

**Question 6 (c)**

**Theorem 13.** If two triangles  $\triangle ABC$  and  $\triangle A'B'C'$  are similar, then their sides are proportional, in order:

$$\frac{|AB|}{|A'B'|} = \frac{|BC|}{|B'C'|} = \frac{|CA|}{|C'A'|}$$

Triangles  $ADE$  and  $ABC$  are equiangular because:

$$|\angle DAE| = |\angle BAC| \text{ [Common angle]}$$

$$|\angle ADE| = |\angle ABC| \text{ [Corresponding angles]}$$

$$|\angle AED| = |\angle ACB| \text{ [Corresponding angles]}$$

$$\therefore \frac{|AD|}{|AB|} = \frac{|DE|}{|BC|} \Rightarrow \frac{3}{9} = \frac{|DE|}{12}$$

$$|DE| = \frac{3 \times 12}{9} = 4 \text{ cm}$$


---