









How many passengers?

The big red bus makes lots of stops picking up and dropping off passengers.
Can you solve the sums below to find out how many people are on the bus after each stop?

    +   =

      -  =

   +     =

     -   =

   +  +   =

    -   =

Follow us:



© 2020 Orchard Toys Ltd

#LoveOrchardToys

www.orchardtoys.com