






<b>Y1 Sp10</b>	<b>YEAR 1 - SPRING TEST 10</b>		
First Name		Class	
Last Name		Date	
		TOTAL MARKS	/10

1	$\square = 3 + 3$	<input type="text"/>	 1 mark
---	-------------------	----------------------	---

2	$3 + \square = 3$	<input type="text"/>	 1 mark
---	-------------------	----------------------	--

3	$10 + 7 =$	<input type="text"/>	 1 mark
---	------------	----------------------	---

4	$3 - 2 =$	<input type="text"/>	 1 mark
---	-----------	----------------------	---

5	$\square - 8 = 1$	<input type="text"/>	 1 mark
---	-------------------	----------------------	---

6

$$3 + \square = 7$$



1 mark

7

$$\square + 2 = 10$$



1 mark

8

$$10 + 0 =$$



1 mark

9

$$9 + 10 =$$



1 mark

10

$$10 + 6 =$$



1 mark