






<b>Y4 Su5</b>	<b>YEAR 4 - SUMMER TEST 5</b>		
First Name		Class	
Last Name		Date	
		TOTAL MARKS	/20


1	$24 \times 1 =$	 <input type="text"/> 1 mark


2	$\frac{5}{6} - \frac{3}{6} =$	 <input type="text"/> 1 mark


3	$51 \times 0 =$	 <input type="text"/> 1 mark


4	$35 \div 1 =$	 <input type="text"/> 1 mark


5	$155 \div 5 =$	 <input type="text"/> 1 mark

6	$\frac{3}{4}$ of 100 =	 <input type="text"/> 1 mark

7	$11 \times 5 =$	 <input type="text"/> 1 mark

8	$372 + 70 =$	 <input type="text"/> 1 mark

9	$\square \div 8 = 11$	 <input type="text"/> 1 mark

10	$96 \div 12 =$	 <input type="text"/> 1 mark

11  $5 \times 25 \times 3 =$


1 mark

12  $87 - \square = 33$


1 mark

13  $2 \times 11 \times 5 =$


1 mark

14  $\frac{6}{7} + \frac{6}{7} =$


1 mark

15

		6	4	5	5	
+		2	2	8	4	
<hr style="border: 1px solid black;"/>						

1 mark

16

		8	9	9	5	
-		1	1	4	3	
<hr style="border: 1px solid black;"/>						

1 mark

17

		9	6	4	4	
-		3	3	5	4	
<hr style="border: 1px solid black;"/>						

1 mark

18

		2	6	4	5	
+		1	5	1	1	
<hr style="border: 1px solid black;"/>						

1 mark

19

		3	<hr style="border: 1px solid black; width: 20px; display: inline-block; vertical-align: middle; margin: 0 5px;"/>	6	3	
--	--	---	---	---	---	--

1 mark

20

		3	5	3	
x				5	
<hr style="border: 1px solid black;"/>					

1 mark