






Y4 Su7	YEAR 4 - SUMMER TEST 7		
First Name		Class	
Last Name		Date	
		TOTAL MARKS	/20


1	$40 \times 0 =$	
	 <input type="checkbox"/>	1 mark


2	$\square \div 9 = 5$	
	 <input type="checkbox"/>	1 mark


3	$2 \times 11 =$	
	 <input type="checkbox"/>	1 mark


4	$\frac{4}{8} + \frac{5}{8} =$	
	 <input type="checkbox"/>	1 mark


5	$37 + \square = 72$	
	 <input type="checkbox"/>	1 mark

6	$4 \times 8 \times 5 =$	
	 <input type="checkbox"/>	1 mark

7	$\frac{1}{4}$ of 20 =	
	 <input type="checkbox"/>	1 mark

8	$8 = \square \div 10$	
	 <input type="checkbox"/>	1 mark

9	$\frac{4}{7} - \frac{2}{7} =$	
	 <input type="checkbox"/>	1 mark

10	$49 \div 7 =$	
	 <input type="checkbox"/>	1 mark

