

Monday's Maths- Page 1

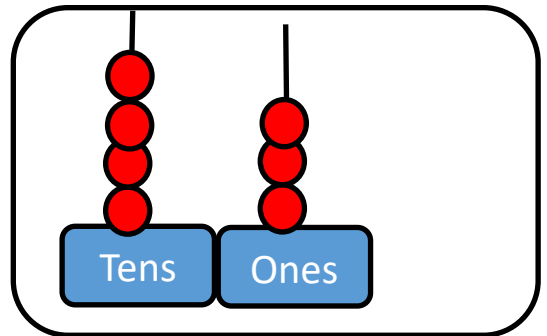

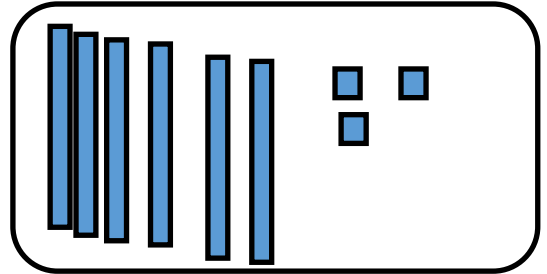


Monday's Maths- Page 2



Tuesday's Maths

Match the money with the correct picture.



Match the money with the correct number sentence.



$$30 + 1 = 31\text{p}$$



$$70 + 1 = 71\text{p}$$



$$80 + 3 = 83\text{p}$$

Wednesday's Maths 1

Who has the least amount of money?
Show your working out.



Wednesday's Maths 2

Who has the most?
Explain who you notice.



Thursday's Maths

Bill picked the number **37** from a bag.

He wrote all the different ways of showing his number. Circle all of them.

Some do not show 37.

$30 + 7$


$3 + 7$

$7 + 30$

$70 + 3$



thirty- seven



three seven

Bill picked the number **50** from a bag.


He wrote all the different ways of showing his number. Circle all of them. Some do not show 50.

$0 + 50$

fifteen

$45 + 5$

$10 + 5$




fifty



5×11

Friday's Maths- Knowledge Organiser Quiz

Vocabulary

numeral	1 2 3	How you write a number without letters
word	one two three	How you write a number using letters
odd	will end in ... 1 3 5 7 9	<ul style="list-style-type: none"> a number that can't be shared by 2
even	will end in ... 0 2 4 6 8	<ul style="list-style-type: none"> a number that can be shared by 2
equal to	=	<ul style="list-style-type: none"> the same amount
greater than	>	<ul style="list-style-type: none"> shows the number near the open side is bigger than the number near the pointy side
less than	<	<ul style="list-style-type: none"> shows the number near the pointy side is smaller than the number near the open side
place value	33	<ul style="list-style-type: none"> how much a number is worth depending on where it is the red 3 is really 30 so is worth more
partition in to tens and ones		<ul style="list-style-type: none"> splitting 1 number into the tens number and the ones number
between	1 2 3 4 5	<ul style="list-style-type: none"> when a number is in the middle of two numbers "3 is between 1 and 5"

1.) Tick the number sentence that shows partitioning into tens and ones. $54 = 50 + 40$
 $54 = 50 + 4$ $54 = 53 + 1$

2.) True or false- The red sentence reads 7 is less than 10.

$7 > 10$

3.) Even numbers always end in 0, 4, 6, 8 and what else? _____

4.) Circle the numeral three 3

5.) Which word means 'when a number is in the middle of two numbers? _____