



Home Learning 1A- Arithmetic



Write the number thirty as a digit

Finish the pattern

10 _____ 12 13 14 15 _____ 17

Write a number between 26 and 31

Write one less than 25 _____

What is the 3 worth in the number 37?



Home Learning 1B- Arithmetic



$$8 + 6 =$$

$$20 - 5 =$$

$$\underline{\hspace{2cm}} + 7 = 10$$

$$9 + \underline{\hspace{2cm}} = 15$$

$$8 - \underline{\hspace{2cm}} = 2$$



Home Learning 1C - Arithmetic



$$5 + \underline{\quad} = 10$$

$$17 + 3 = \underline{\quad}$$

$$10 - 7 = \underline{\quad}$$

$$42 + 6 = \underline{\quad}$$

$$30 - 7 = \underline{\quad}$$



Home Learning 1D - Arithmetic



$$2 \times 5 =$$

$$10 \times 2 =$$


$$3 \times 3 =$$

$$120 \div 10 =$$

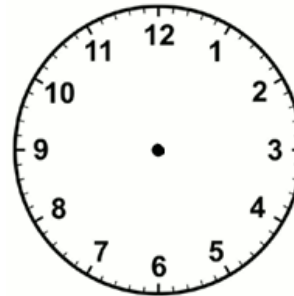
$$15 \div 3 =$$



Home Learning 1D - Time, money and SSM



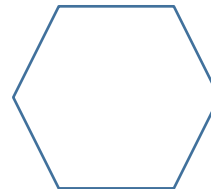
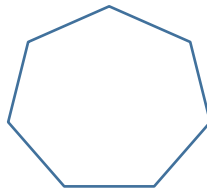
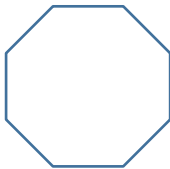
Draw hands on the clock to show quarter to six




Tick the odd numbered coin.



Circle the octagon



What fraction of the shape is shaded?



Draw a line of symmetry on this shape.

