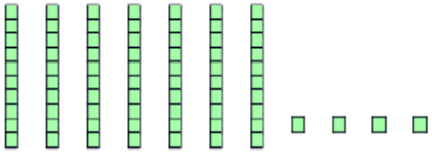
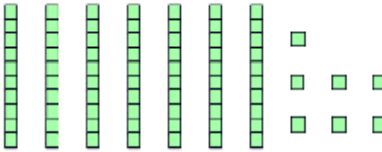
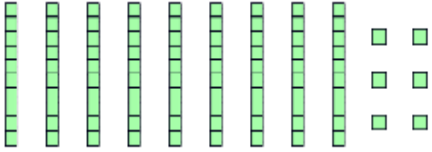

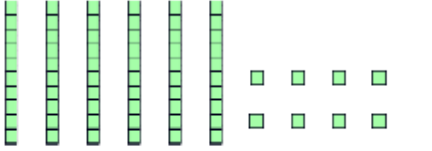
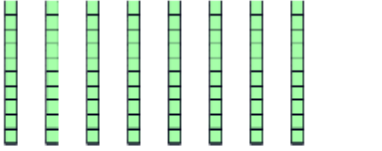

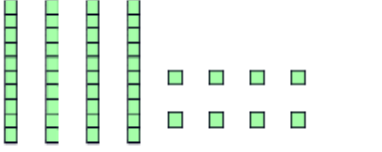
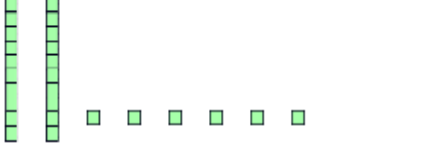
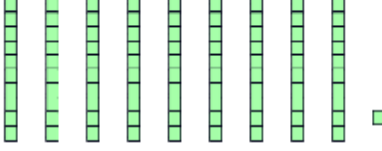


Wednesday's Maths

I understand 2 digit numbers are made up of tens and ones

Write the number shown by the base ten

 <div style="border: 1px solid black; display: inline-block; padding: 2px 10px; margin-left: 10px;">74</div> <hr style="width: 50px; margin-left: 10px;"/>	 <hr style="width: 50px; margin-left: 10px;"/>
 <hr style="width: 50px; margin-left: 10px;"/>	 <hr style="width: 50px; margin-left: 10px;"/>
 <hr style="width: 50px; margin-left: 10px;"/>	 <hr style="width: 50px; margin-left: 10px;"/>
 <hr style="width: 50px; margin-left: 10px;"/>	 <hr style="width: 50px; margin-left: 10px;"/>
 <hr style="width: 50px; margin-left: 10px;"/>	 <hr style="width: 50px; margin-left: 10px;"/>