



Monday's Five A Day



Write the number nineteen as a digit

Finish the pattern

90 89 _____ 87 86 _____ 84

Write a number between 36 and 40

Write one less than 50 _____

What is the underlined 8 worth in the number 88 ?



Tuesday's Five A Day



$16 + 6 =$

$20 - 6 =$


$\underline{\quad\quad} + 4 = 10$

$7 + \underline{\quad\quad} = 14$

$30 - \underline{\quad\quad} = 28$



Wednesday's Five A Day



$$6 + \underline{\quad} = 10$$

$$20 - 5 =$$


$$\underline{\quad} = 2 + 2$$

$$16 - \underline{\quad} = 11$$

$$0 + 5 =$$



Thursday's Five A Day



$$5 + 5 + 5 =$$

$$2 + 2 + 2 + 2 + 2 =$$


$$10 + 10 + 10 + 10 =$$

$$10 + 10 + 10 =$$

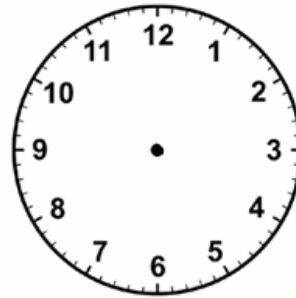
$$3 + 3 + 3 =$$



Friday's Five A Day



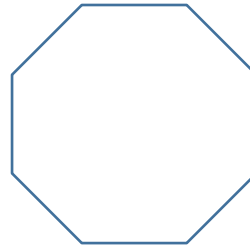
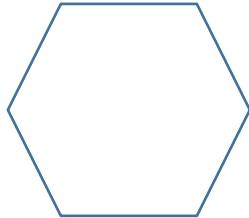
Draw hands on the clock to show half past 3



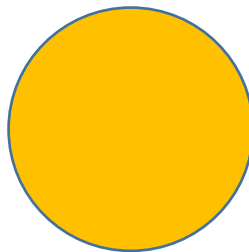
How much money can you see?



Tick the shape with 6 sides and name it.



Tick the shape that is $\frac{1}{2}$ yellow



Tick the thinnest line

