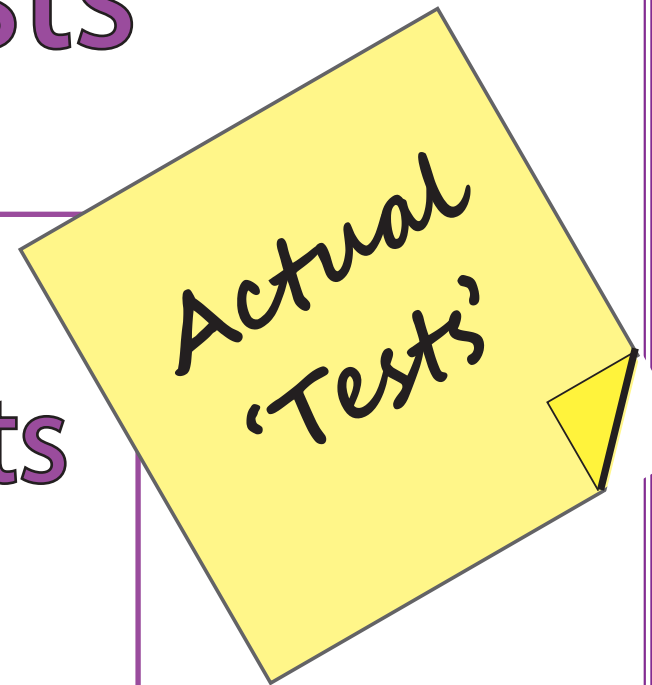



'Big Maths, Beat That'

CLIC Level Tests

Weekly
Key Assessments
For
Up-levelling



Week Six



$$\begin{array}{c} \text{5 balloons} \\ + \\ \text{5 balloons} \\ = \end{array} \bigcirc$$

Name: _____

How many boys?

8 boys

BIG MATHS BEAT THAT!

Write these numbers in order

8	5	7
<input type="text"/>	<input type="text"/>	<input type="text"/>

1 less than 8 is?

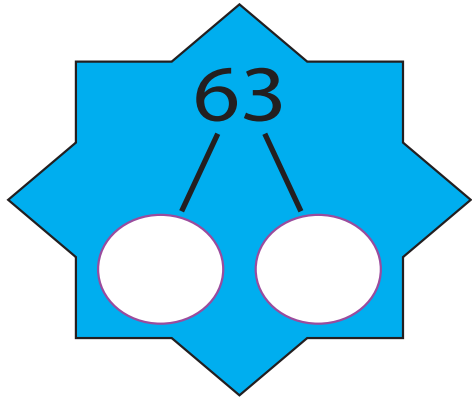
Double 4 is

$$1 + \square = 10$$

5 + 3 =

Half of 8 is...

9 take away 8 is...



Write out the fact family for:

$9 + 5 = 14$

Name: _____

$90 + 30 =$

BIG MATHS BEAT THAT!

Draw a ring around the **even** numbers

52 33 46 70

$3 \times 3 =$

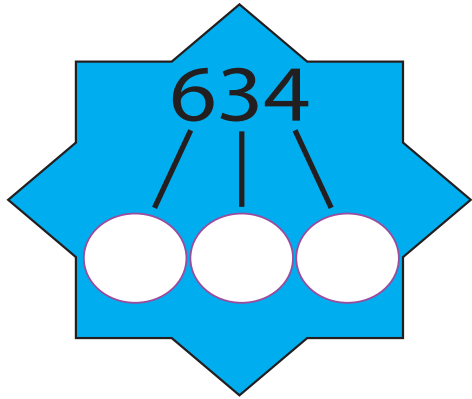
Double 8 is

$31 + \square = 40$

$86 + 5 =$

$43 - 6 =$

Half of 20 is...



Write out the fact family for:

$13 \times 15 = 195$

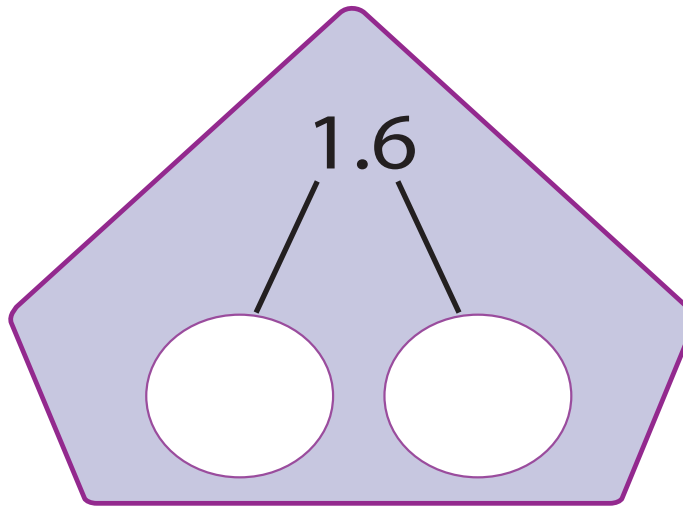
Name: _____

$59 \times 10 =$

$920 \div 10 =$

BIG MATHS BEAT THAT!

$51 \div 4 =$



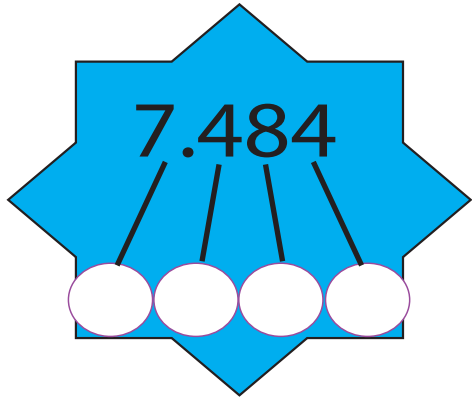
$36 + \square = 100$

$30 \times 70 =$

$483 + 427 =$

$834 - 457 =$

$85 \times 4 =$



$$\frac{1}{2} = \text{ } = \text{ }$$

fraction decimal percentage

Name: _____

$$29 \times 100 = \text{ } \text{ } \text{ }$$

$$343 \div 10 = \text{ } \text{ }$$

BIG MATHS BEAT THAT!

Write a multiple
of 6 between 40
and 55

$$488 \div 5 = \text{ } \text{ } \text{ }$$

$$89 \times 33 = \text{ } \text{ } \text{ }$$

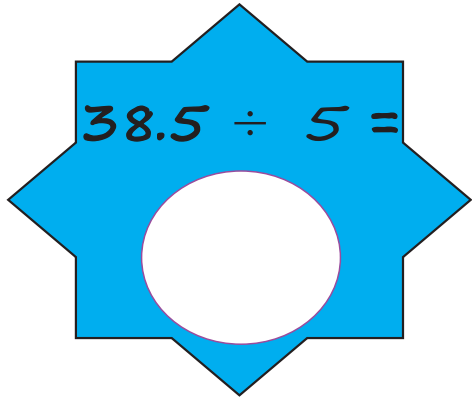
$$478 + \text{ } = 1000$$

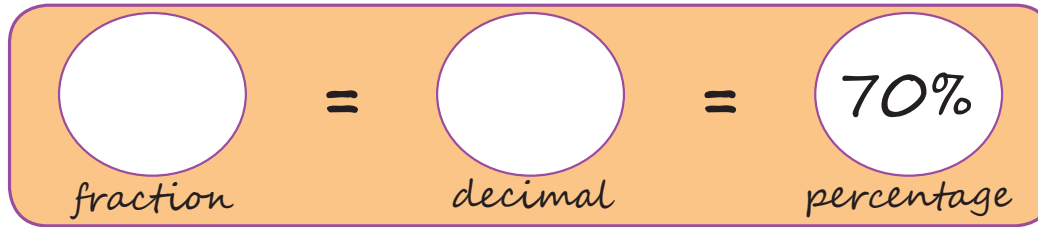
$$6.68 + 4.49 = \text{ } \text{ } \text{ }$$

$$5.23 - 2.97 = \text{ } \text{ } \text{ }$$

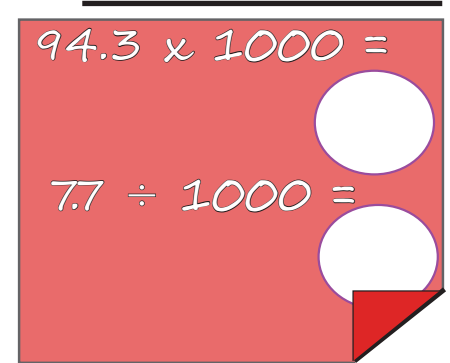
$$7.7 \times 3 = \text{ } \text{ } \text{ }$$

Name: _____


$$38.5 \div 5 =$$



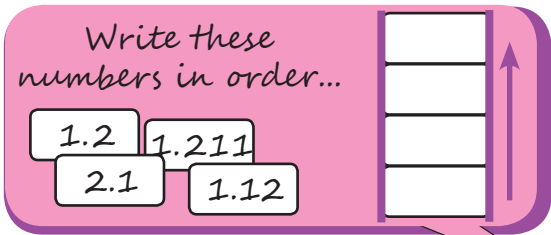
fraction = decimal = percentage

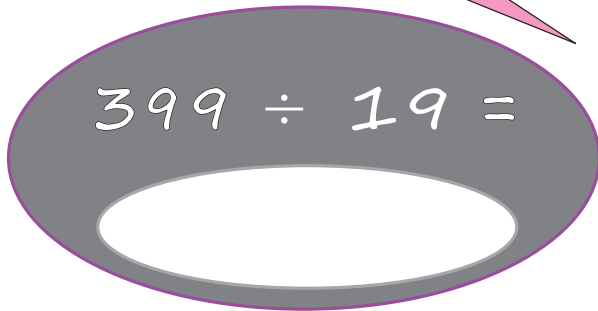

$$94.3 \times 1000 =$$
$$7.7 \div 1000 =$$

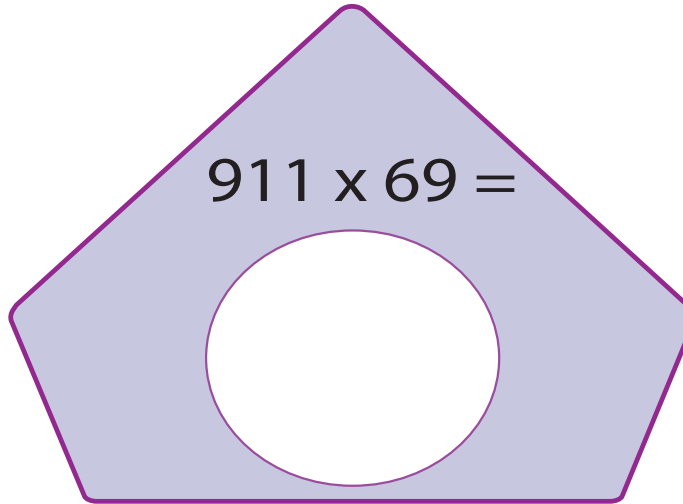
BIG MATHS BEAT THAT!

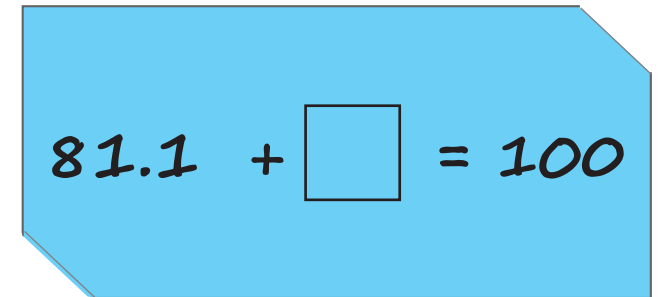
Write these numbers in order...

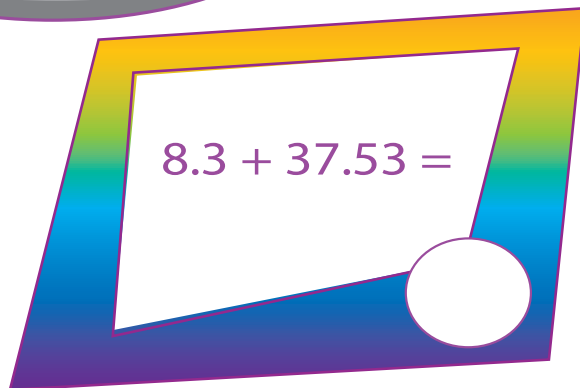
1.2	1.211
2.1	1.12

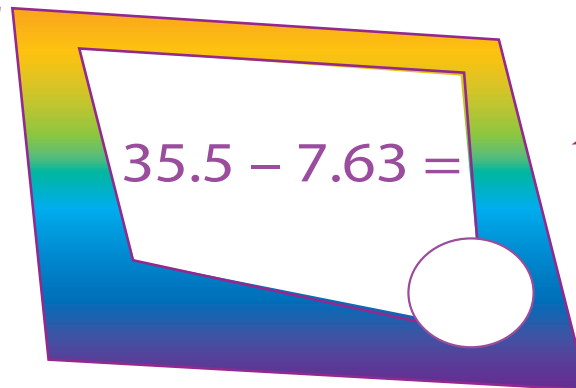


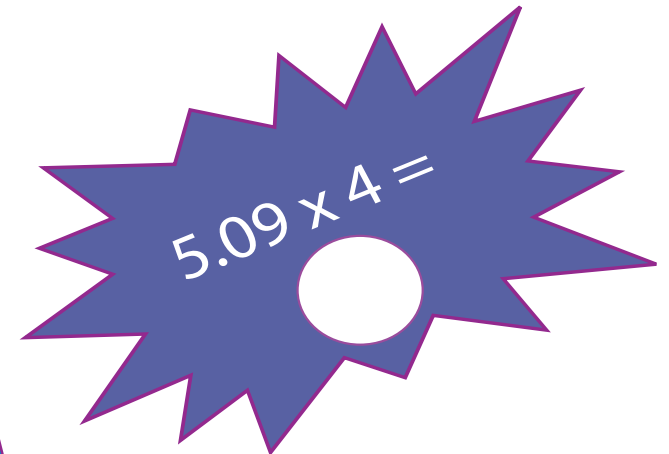

$$399 \div 19 =$$


$$911 \times 69 =$$


$$81.1 + \square = 100$$


$$8.3 + 37.53 =$$


$$35.5 - 7.63 =$$


$$5.09 \times 4 =$$

Answers

Week Six

Answers

2

$$5 + 5 = 10$$

Name: _____

How many boys?

9

BIG MATHS BEAT THAT!

Write these numbers in order

8	5	7
5	7	8

1 less than 8 is?

7

Double 4 is

8

$$1 + 9 = 10$$

9 take away 8 is...

1

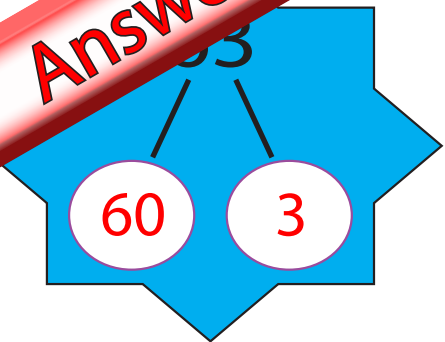
$$5 + 3 =$$

8

Half of 8 is...

4

Answers



Write out the fact family for:

$9 + 5 = 14$	$14 - 5 = 9$
$5 + 9 = 14$	$14 - 9 = 5$

Name: _____

$90 + 30 =$

120

BIG MATHS BEAT THAT!

Draw a ring around the **even** numbers

52 33 46 70

$3 \times 3 =$

9

Double 8 is

16

$31 + 9 = 40$

$86 + 5 =$

91

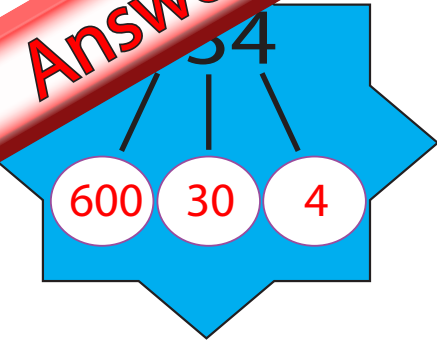
$43 - 6 =$

37

Half of 20 is...

10

Answers



Write out the fact family for:

$13 \times 15 = 195$

$195 \div 15 = 13$

$15 \times 13 = 195$

$195 \div 13 = 15$

Name: _____

$59 \times 10 = 590$
 $920 \div 10 = 92$

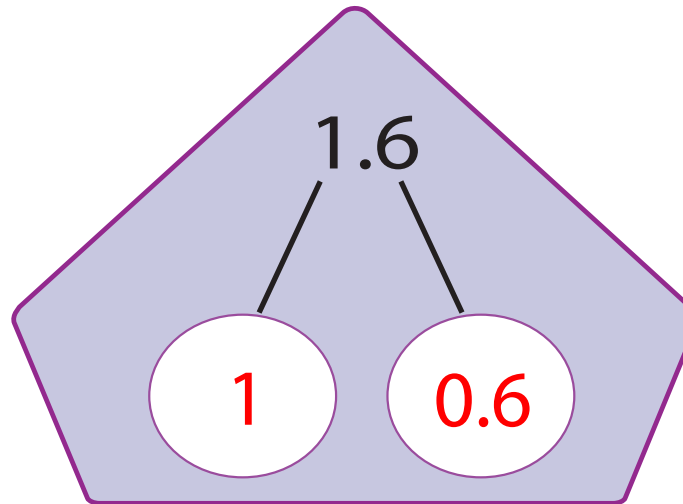
BIG MATHS BEAT THAT!

$51 \div 4 = 12 \text{ r } 3$

$36 + 64 = 100$

$30 \times 70 =$

2100



$483 + 427 =$

910

$834 - 457 =$

377

$85 \times 4 = 340$

Answers

7.484

7 0.4 0.08 0.004

$\frac{1}{2} = 0.5 = 50\%$

fraction decimal percentage

Name: _____

$29 \times 100 = 2900$

$343 \div 10 = 34.3$

BIG MATHS BEAT THAT!

Write a multiple of 6 between 40 and 55

42, 48 or 54

$89 \times 33 =$

2937

$478 + 522 = 1000$

$488 \div 5 =$

97 r 3

$7.7 \times 3 = 23.1$

$6.68 + 4.49 =$

11.17

$5.23 - 2.97 =$

2.26

Answers

7.7

$\frac{7}{10}$

fraction

=

0.7

decimal

=

70%

percentage

Name: _____

$$94.3 \times 1000 =$$

94300

$$7.7 \div 1000 =$$

0.0077

BIG MATHS BEAT THAT!

Write these numbers in order...

2.1

1.211

1.2

1.12

1.2

1.211

2.1

1.12

$$399 \div 19 =$$

21

$$911 \times 69 =$$

62859

$$81.1 + 18.9 = 100$$

$$8.3 + 37.53 =$$

45.83

$$35.5 - 7.63 =$$

27.87

$$5.09 \times 4 =$$

20.36