



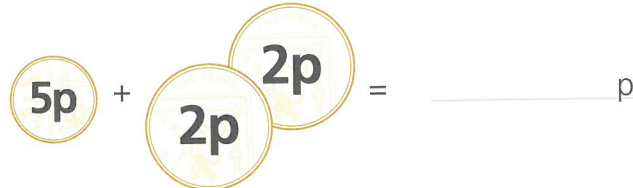
# SECTION 1 | Test 11

## A Answer

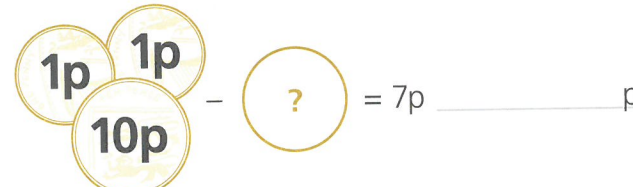
1  \_\_\_\_\_

2  \_\_\_\_\_

3  \_\_\_\_\_

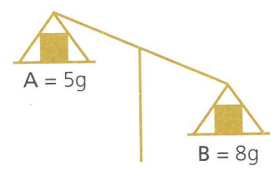
4  \_\_\_\_\_ p

5  \_\_\_\_\_ p


6  \_\_\_\_\_ p

7 Which shape is cut in half? \_\_\_\_\_



8  How much heavier is B? \_\_\_\_\_ g

9 If today is Thursday, what will tomorrow be? \_\_\_\_\_

10  What time is it? \_\_\_\_\_ o'clock

## B Answer

1  $6 + 7 =$  \_\_\_\_\_

2  $46 + 7 =$  \_\_\_\_\_

3  $3 + 9 =$  \_\_\_\_\_

4  $73 + 9 =$  \_\_\_\_\_

5 1, 3, 5, 7, \_\_\_\_\_

6  $18 - 9 =$  \_\_\_\_\_

7  $38 - 9 =$  \_\_\_\_\_

8  $17 - 10 =$  \_\_\_\_\_

9  $57 - 10 =$  \_\_\_\_\_

10 19, 17, 15, 13, \_\_\_\_\_

## C Answer

1 Add 5 and 8. \_\_\_\_\_

2 Take 6 from 11. \_\_\_\_\_

3 The total of 6 and 8 is \_\_\_\_\_

4 The difference between 13 and 4 is \_\_\_\_\_

5 The sum of 7 and 5 is \_\_\_\_\_

6 16 is 9 more than \_\_\_\_\_

7 Subtract 3 from 7. \_\_\_\_\_

8 17 minus 9 is \_\_\_\_\_

9 5 is 3 less than \_\_\_\_\_

10 7 plus 7 is \_\_\_\_\_