
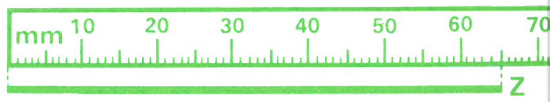
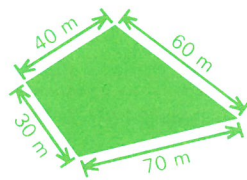


Section 1 Test 11

A	ANSWER
1	$1 \text{ m } 50 \text{ cm} \div 10 = \underline{\hspace{2cm}} \text{ cm}$
2	$\frac{1}{2} \text{ kg} + 375 \text{ g} = \underline{\hspace{2cm}} \text{ g}$
3	$7300 \div 100 = \underline{\hspace{2cm}}$
4	$\frac{7}{8}$ of £16 = $\underline{\hspace{2cm}}$ £
5	$£3.00 - £1.13 = \underline{\hspace{2cm}}$ £
6	$450 \text{ km} - 360 \text{ km} = \underline{\hspace{2cm}} \text{ km}$
7	$£2.47 + £1.63 = \underline{\hspace{2cm}}$ £
8	$1\frac{1}{2} \text{ m} = \underline{\hspace{2cm}} \text{ mm}$
9	$(7 \times 8) - (5 \times 6) = \underline{\hspace{2cm}}$
10	$25 \text{ mm} \times 8 = \underline{\hspace{2cm}} \text{ cm}$
11	$10.24 \text{ a.m. to } 12.10 \text{ p.m.}$ = $\underline{\hspace{1cm}}$ h $\underline{\hspace{1cm}}$ min
12	$(\frac{1}{7} \text{ of } 42) - (\frac{1}{9} \text{ of } 18) = \underline{\hspace{2cm}}$

B	ANSWER
1	Write the name of the coin which has the same value as £0.02. $\underline{\hspace{2cm}}$
2	Write the next two numbers in this series. 49, 42, 35, $\underline{\hspace{1cm}}$, $\underline{\hspace{1cm}}$
3	Find the total of £2.36 and £0.99. $\underline{\hspace{2cm}}$ £
4	$\frac{9}{10}$ of a sum of money is £45. Find the whole amount. $\underline{\hspace{2cm}}$ £
5	Write in cm the length remaining when 10 cm is reduced by 55 mm. $\underline{\hspace{2cm}}$ cm
6	How many g are there in $\frac{1}{10}$ kg? $\underline{\hspace{2cm}}$ g
7	What is the difference between 42 and 420? $\underline{\hspace{2cm}}$
8	Six cost £2.16. What is the cost of one? $\underline{\hspace{2cm}}$ p
9	Write 250 mm as m. $\underline{\hspace{2cm}}$ m
10	Add 2 times 9 to 5 times 9. $\underline{\hspace{2cm}}$
11	If 5 sweets cost 30p, what will 15 cost? $\underline{\hspace{2cm}}$ p
12	In the number 9440 , how many times greater is the 4 marked x than the 4 marked y? $\underline{\hspace{2cm}}$

C	ANSWER
1	In a class library there are 138 fiction books and 144 non-fiction books. How many books are there altogether? $\underline{\hspace{2cm}}$
2	What fraction of 1 hour is (a) 20 minutes $\underline{\hspace{2cm}}$ (a) $\underline{\hspace{1cm}}$ h (b) 40 minutes? $\underline{\hspace{2cm}}$ (b) $\underline{\hspace{1cm}}$ h
3	8 kg 500 g is divided into 10 equal quantities. What does one of the quantities weigh? $\underline{\hspace{2cm}}$ g
4	 PACK OF 4 for 90p How much will 20 cans cost? $\underline{\hspace{2cm}}$ £
5	How many hours will it take a car travelling at 70 km/h to travel 280 km? $\underline{\hspace{2cm}}$ h
6	By how many m is the sum of 870 m and 650 m more than $1\frac{1}{2}$ km? $\underline{\hspace{2cm}}$ m
7	Which number when multiplied by itself equals 64? $\underline{\hspace{2cm}}$
8	 Write the length of a line 100 times longer than the line YZ (a) in cm $\underline{\hspace{2cm}}$ (a) $\underline{\hspace{1cm}}$ cm (b) in m. $\underline{\hspace{2cm}}$ (b) $\underline{\hspace{1cm}}$ m
9	Lucy has three times as much as Daniel who has 45p. How much have they altogether? $\underline{\hspace{2cm}}$ £
10	 This is a plan of a playground. How many times round it must the children run in order to run 1 km? $\underline{\hspace{2cm}}$
11	If $\frac{1}{2}$ kg costs 40p, find the cost of (a) 100 g (b) 600 g. $\underline{\hspace{1cm}}$ (a) $\underline{\hspace{1cm}}$ p (b) $\underline{\hspace{1cm}}$ p
12	In the number 6365 , what must be added to the 6 marked y to make it equal in value to the 6 marked x? $\underline{\hspace{2cm}}$