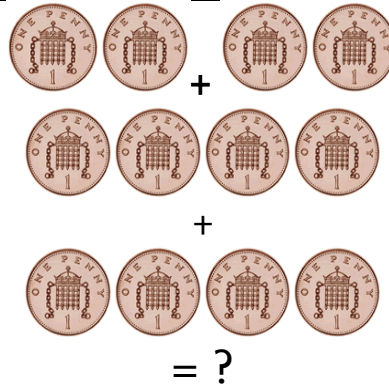
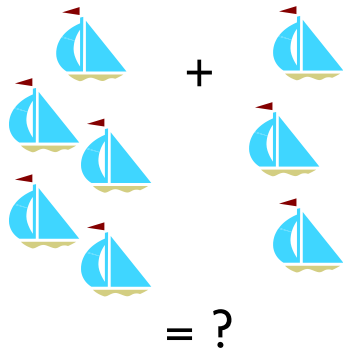



6 people upstairs and  
5 downstairs. How  
many on the bus  
altogether?

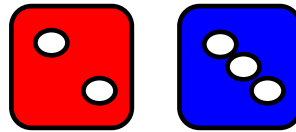


  
If I add these to the  
sweets in the bag there  
will be 10 altogether.  
How many in the bag  
now?

How many  
altogether?



If you add the spots  
on two dice, the total  
will always be an odd  
number.



  
How much altogether?

Counting on always  
makes the number  
bigger

In three fields there  
are 3 cows, 4 cows  
and 5 cows. How  
many cows  
altogether?

True

12

9

10p

12p

11

6

8

False