


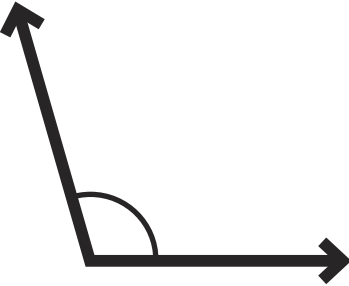
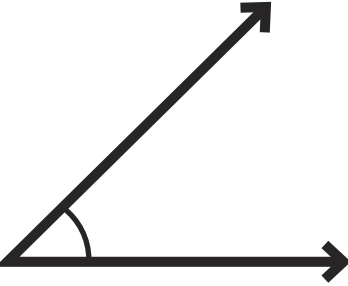
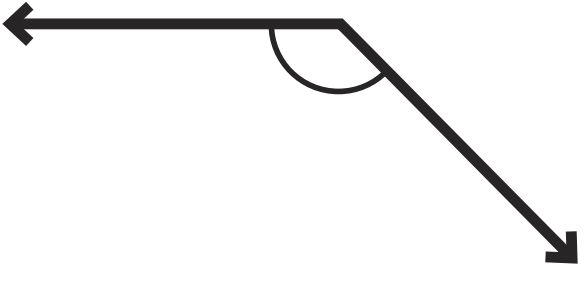


Measurement and Drawing Practice

Use your ruler to measure these lines:

 Length = _____ cm	 Length = _____ cm	 Length = _____ cm
--	---	--

Use your protractor to measure these angles:

 Angle = _____ °	 Angle = _____ °	 Angle = _____ °
--	---	--

Draw a line measuring 10.7cm:

Draw an angle measuring 62°: