

Paper 1

5

$$4 + 5 + 6 = \boxed{\phantom{000}}$$

9

$$56 - \boxed{\phantom{000}} = 51$$

15

$$28 + \boxed{\phantom{000}} = 35$$

24

$$\frac{1}{3} \text{ of } 30 = \boxed{\phantom{000}}$$

# Paper 2

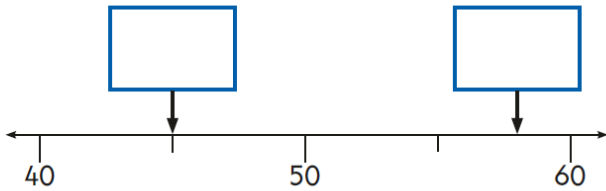
13 Write two numbers to make this calculation correct.

$$\square + \square = 19$$

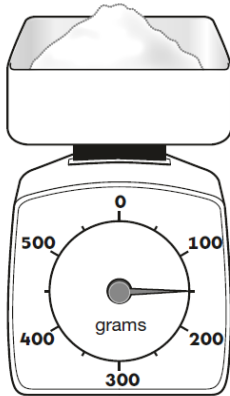
Now write three numbers to make this calculation correct.

$$\square + \square + \square = 19$$

16 Write the correct number in each box.



24 How much does the sugar weigh?

 g

25 Match the sums that have the same answer.

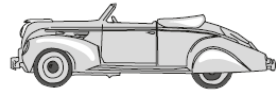
One is done for you.

20 + 8	30 + 28
50 + 8	70 + 18
80 + 8	10 + 18
90 + 8	50 + 48

14 Abdul has some toy cars.

He gives half of them to Ben.

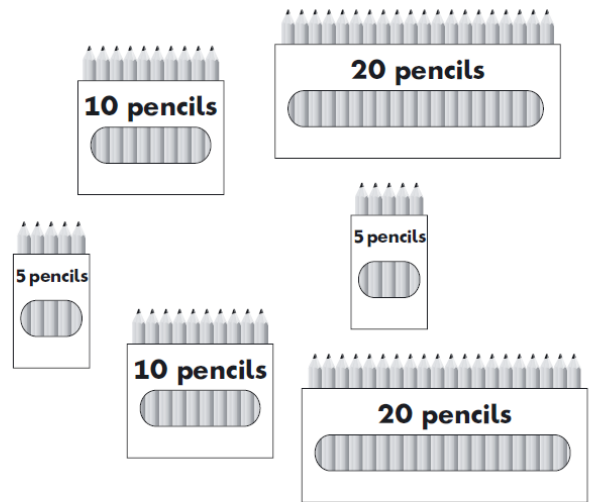
He has four toy cars left.



How many toy cars did Abdul start with?

toy cars

18

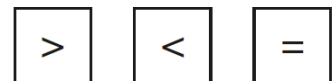


Kemi and Ben share these pencils equally.

How many pencils do they each get?

pencils

29 Here are some signs.



Write the correct sign in each box.

10 + 5  10 × 5

2 × 6  6 + 6