

Tell me everything about the number 10!

Write the number
10



This is the number 8 as a tally.



Can you do the number 10 as a tally.



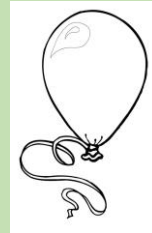
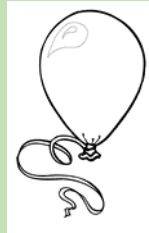

1 more than 10 is ...



Draw 10 candles on the
birthday cake.



Colour in 10 balloons



1 less than 10 is ...

Fill in the missing numbers.

	2	3		5	6		8	9	
--	---	---	--	---	---	--	---	---	--

Fill in the missing numbers to make 10.

$$2 + \underline{\quad\quad\quad} = 10$$

$$4 + \underline{\quad\quad\quad} = 10$$

$$\underline{\quad\quad\quad} + 5 = 10$$

$$8 + \underline{\quad\quad\quad} = 10$$

$$3 + \underline{\quad\quad\quad} = 10$$

$$\underline{\quad\quad\quad} + 9 = 10$$

What is double 10?
You can draw a picture to help you.