

Name: _____

Timetables.

$1 \times 2 = \square$

$7 \times 2 = \square$

$1 \times 10 = \square$

$8 \times 5 = \square$

$5 \times 8 = \square$

$2 \times 8 = \square$

$7 \times 1 = \square$

$10 \times 4 = \square$

$7 \times 5 = \square$

$5 \times 10 = \square$

$5 \times 5 = \square$

$2 \times 6 = \square$

$5 \times 9 = \square$

$9 \times 5 = \square$

$10 \times 10 = \square$

$2 \times 4 = \square$

$12 \times 5 = \square$

$11 \times 2 = \square$

$7 \times 10 = \square$

$2 \times 5 = \square$

$4 \times 2 = \square$

$10 \times 5 = \square$

$3 \times 2 = \square$

$0 \times 10 = \square$

$12 \times 10 = \square$

$2 \times 4 = \square$

$2 \times 3 = \square$

$6 \times 5 = \square$

$5 \times 10 = \square$

$12 \times 2 = \square$

$10 \times 10 = \square$

$11 \times 5 = \square$

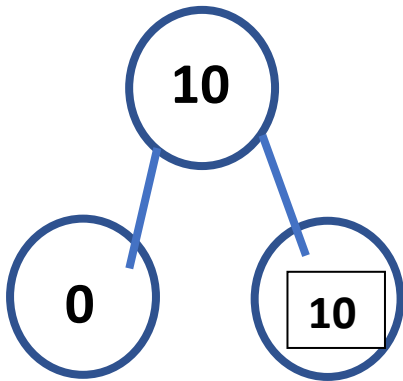
$12 \times 10 = \square$

Name: _____

Number bonds.

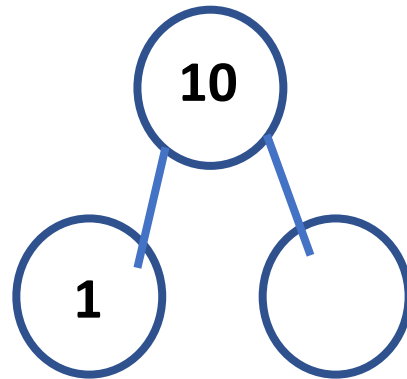
Complete the number bonds and use the numbers to create addition sentences. Can you show the inverse?

One has been done for you.



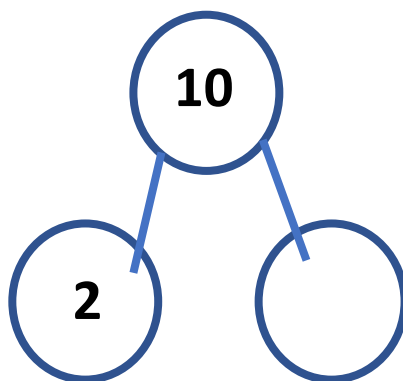
$$\boxed{0} + \boxed{10} = \boxed{10}$$

$$\boxed{10} + \boxed{0} = \boxed{10}$$



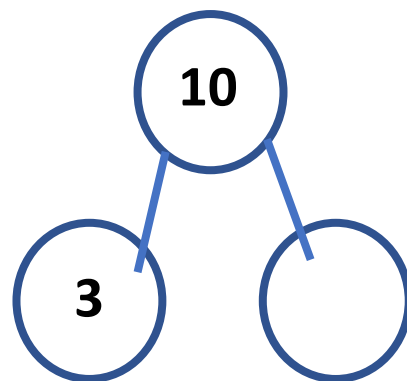
$$\boxed{} + \boxed{} = \boxed{}$$

$$\boxed{} + \boxed{} = \boxed{}$$



$$\boxed{} + \boxed{} = \boxed{}$$

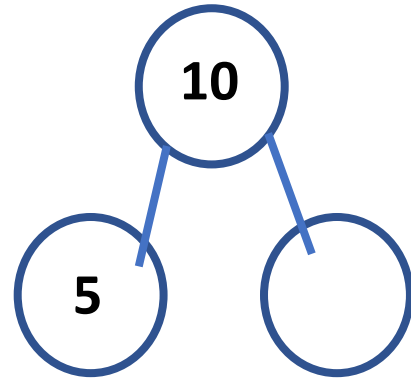
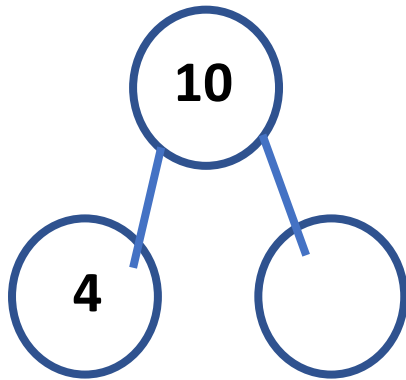
$$\boxed{} + \boxed{} = \boxed{}$$



$$\boxed{} + \boxed{} = \boxed{}$$

$$\boxed{} + \boxed{} = \boxed{}$$

Name: _____



$$\square + \square = \square$$

$$\square + \square = \square$$

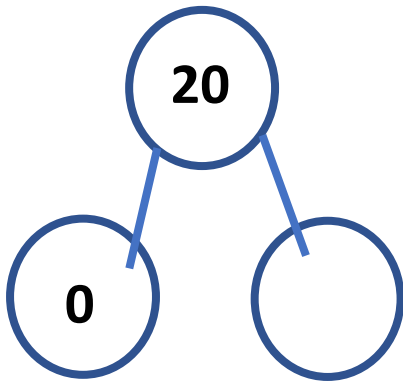
$$\square + \square = \square$$

Name: _____

Number bonds.

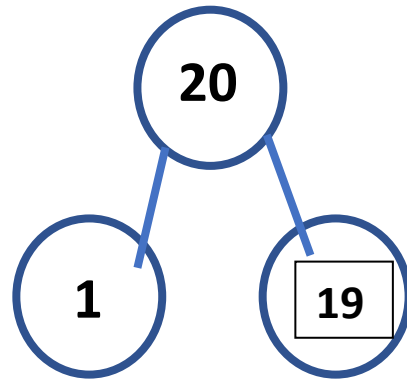
Complete the number bonds and use the numbers to create addition sentences. Can you show the inverse?

One has been done for you.



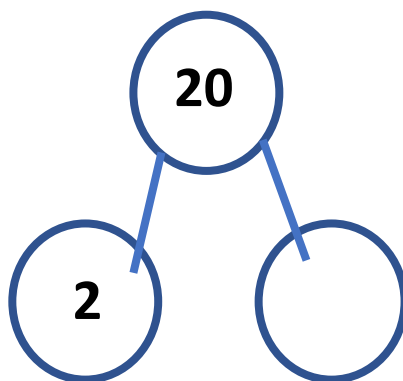
$$\square + \square = \square$$

$$\square + \square = \square$$



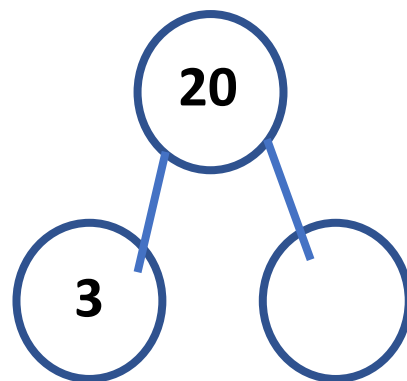
$$1 + 19 = 20$$

$$19 + 1 = 20$$



$$\square + \square = \square$$

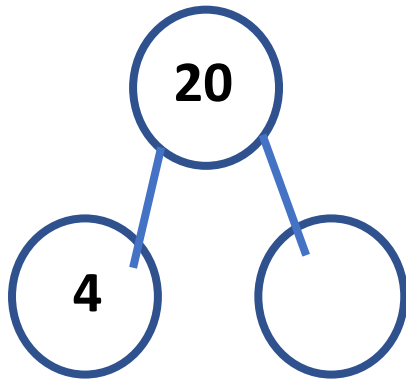
$$\square + \square = \square$$



$$\square + \square = \square$$

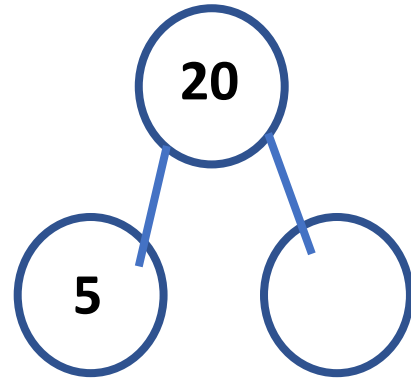
$$\square + \square = \square$$

Name: _____



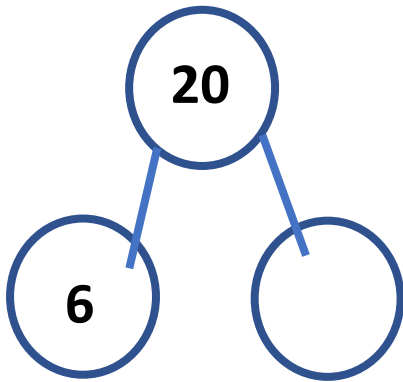
$$\square + \square = \square$$

$$\square + \square = \square$$



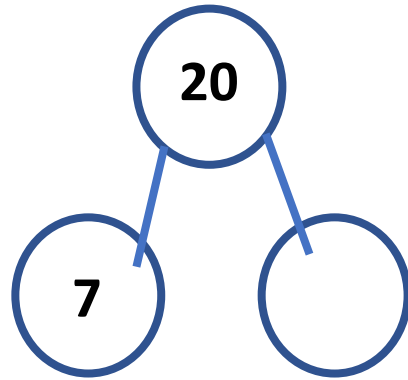
$$\square + \square = \square$$

$$\square + \square = \square$$



$$\square + \square = \square$$

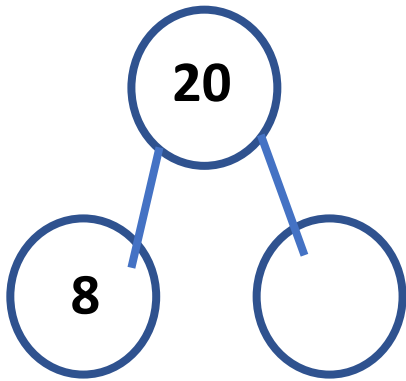
$$\square + \square = \square$$



$$\square + \square = \square$$

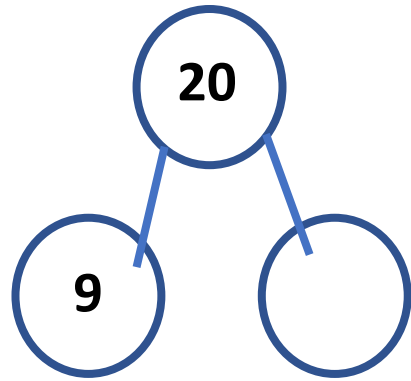
$$\square + \square = \square$$

Name: _____



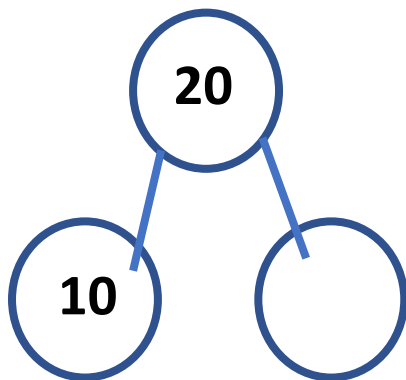
$$\square + \square = \square$$

$$\square + \square = \square$$



$$\square + \square = \square$$

$$\square + \square = \square$$

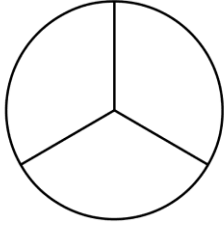


$$\square + \square = \square$$

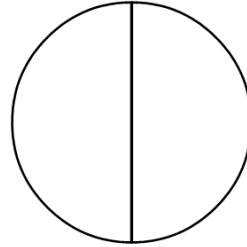
Name: _____

Fractions.


Shade in the fraction:




$$\frac{1}{3}$$



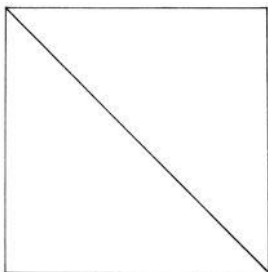
$$\frac{1}{2}$$



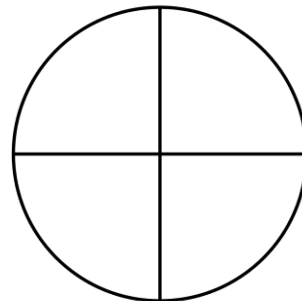
$$\frac{1}{4}$$



$$\frac{2}{3}$$



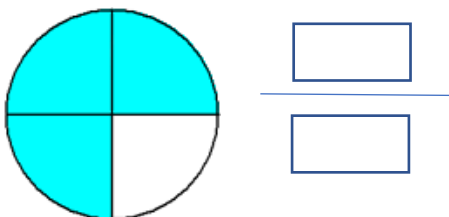


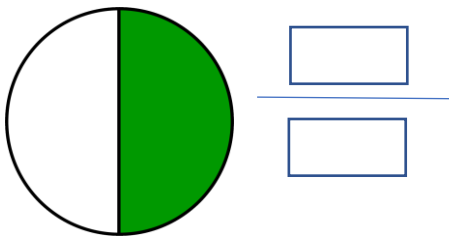
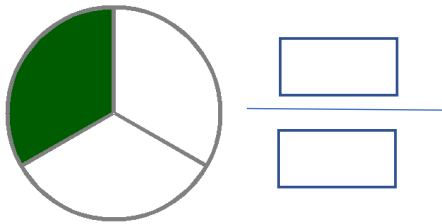
$$\frac{1}{2}$$



$$\frac{3}{4}$$

Name: _____


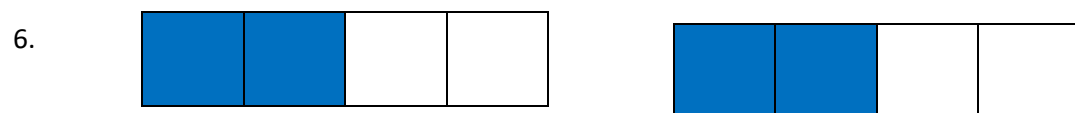
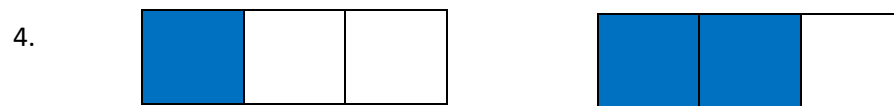
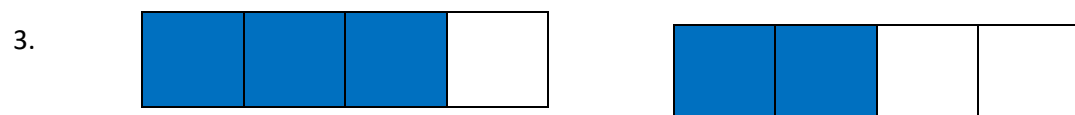
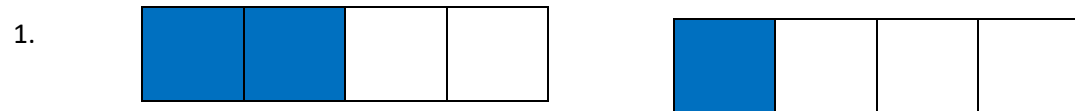
What fraction is shaded:



Name: _____

Compare and order fractions.

Use the symbols ($>$ $<$ or $=$) to compare the fractions below.



Name: _____

Division.

$6 \div 2 =$

$10 \div 5 =$

$10 \div 5 =$

$50 \div 10 =$

$14 \div 2 =$

$20 \div 2 =$

$25 \div 5 =$

$8 \div 2 =$

Name: _____

$18 \div 2 =$

$15 \div 5 =$

$10 \div 10 =$

$20 \div 5 =$

$12 \div 2 =$

$30 \div 10 =$

$22 \div 2 =$

$35 \div 5 =$

Name: _____

Match up the money with its given name.



£1

5p

10p

20p

50p

£2

Name: _____

Name these coins and notes:

Name: _____

How else can you make this amount?
How many methods can you think of?



For example, $20p + 20p + 20p + 20p + 20p = \text{£}1$

How else can you make this amount?

How many methods can you think of?



How else can you make this amount?
How many methods can you think of?







How else can you make this amount?
How many methods can you think of?



Name: _____

Match up the amounts that are equal/the same.






Name: _____