

# Comparing time

1 Tick the longest time in each set.

a) 1 minute

1 second

1 hour ✓

b) 1 week

1 month ✓

1 day

2 Tick the shortest time in each set.

a) 1 minute

1 second ✓

1 hour

b) 1 week

1 month

1 day ✓

3 Write  $>$ ,  $<$  or  $=$  to compare the times.

1 day  $<$  1 week

7 days  $=$  1 week

1 month  $>$  1 week






4 Three children ran a race.

Ron

Kim

Sam



65 seconds

53 seconds

60 seconds

Complete the sentences.

- a) Kim was the fastest.
- b) Ron was the slowest.
- c) Kim was faster than Sam.

5 Use a stopwatch to compare how long each activity takes.

- Counting to 10
- Writing your name 3 times.
- Building a tower of 10 cubes.

Use these words and phrases.

fastest

slowest

faster than

slower than

