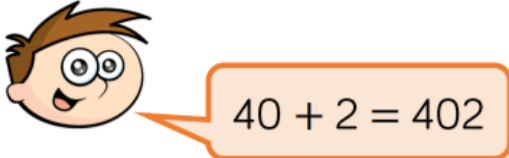




Homework tasks for Year 3

10.06.21

Each week homework will be set for your child. These tasks will include spellings, a number focus and reading or writing. There is also an optional half termly project.

Activity	Please help your child with the following tasks:																						
Spellings	<p>Spelling words to be learnt:</p> <table border="0"><tr><td>Miss Wyatt's group:</td><td>Miss Simpson's group:</td></tr><tr><td>Plays</td><td>relevant</td></tr><tr><td>Enjoys</td><td>dominant</td></tr><tr><td>Monkeys</td><td>performance</td></tr><tr><td>Holidays</td><td>finance</td></tr><tr><td>Cries</td><td>vacancy</td></tr><tr><td>Replies</td><td>prevent</td></tr><tr><td>Studies</td><td>current</td></tr><tr><td>Families</td><td>evidence</td></tr><tr><td>Babies</td><td>emergency</td></tr><tr><td>Pennies</td><td>consistency</td></tr></table> <p>Your child will be tested on these words on Friday 18th June</p>	Miss Wyatt's group:	Miss Simpson's group:	Plays	relevant	Enjoys	dominant	Monkeys	performance	Holidays	finance	Cries	vacancy	Replies	prevent	Studies	current	Families	evidence	Babies	emergency	Pennies	consistency
Miss Wyatt's group:	Miss Simpson's group:																						
Plays	relevant																						
Enjoys	dominant																						
Monkeys	performance																						
Holidays	finance																						
Cries	vacancy																						
Replies	prevent																						
Studies	current																						
Families	evidence																						
Babies	emergency																						
Pennies	consistency																						
Number focus	<p>Mild:</p> <p>Teddy thinks that,</p>  <p>Explain the mistake he has made.</p> <p>Can you show the correct answer using concrete resources?</p> <p>$30 + 7 =$ $20 + 8 =$ $100 + 5 =$</p>																						

Spicy



$$3 + 3 + 3 = 3 \times 3$$

Is Mo correct? Explain why.

Draw an image to help you.

Use $<$, $>$ or $=$ to make the statements correct.

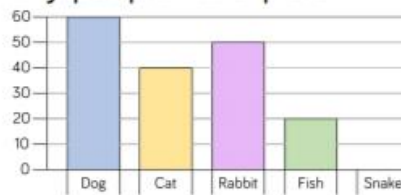
3×5 $5 + 5 + 5 + 5$

2×2 $2 + 2$

10×2 $5 + 5 + 5$

Hot:

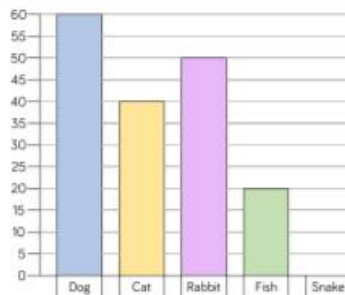
Rosie and Jack have drawn bar charts to show how many people have pets



Rosie says,



I asked more people because my scale goes up in larger jumps.



Jack says,



I asked more people because my bars are taller.

Who is correct? Explain why.



Reading or Writing task	<p>Mild:</p> <p>Which option uses full stops correctly?</p> <p style="text-align: right;">Tick one</p> <p>I ran outside. Tom sat in his room. <input type="checkbox"/></p> <p>Katy played in. Amy's room. <input type="checkbox"/></p> <p>He didn't hear. Emma shouting. <input type="checkbox"/></p> <p>The toys were on. Jamie's cupboard. <input type="checkbox"/></p> <p>Spicy:</p> <p>Add a question mark or an exclamation mark to complete each sentence below.</p> <p><i>How are you feeling</i> <input type="checkbox"/></p> <p><i>How much fun we had</i> <input type="checkbox"/></p> <p><i>What shall we do now</i> <input type="checkbox"/></p> <p>Hot:</p> <p>Tick the option that uses a and an correctly.</p> <p style="text-align: right;">Tick one</p> <p>I ate a apple and an banana. <input type="checkbox"/></p> <p>She took a blue and an orange pen. <input type="checkbox"/></p> <p>He had a egg and an sausage for lunch. <input type="checkbox"/></p> <p>You need a stamp and a envelope. <input type="checkbox"/></p>
Half termly project (optional)	<p>This is an optional project:</p> <p>This half-term we will be focussing on the geography of Europe.</p> <p>Your task is to choose a country in Europe to research and create a presentation or poster about your chosen country.</p> <p>Please email photographs, examples of work to our class email account: Badgers@shirley.cambs.sch.uk Foxes@shirley.cambs.sch.uk</p> <p>We will share these projects in class and post some of these on our year group blog page.</p>

Your child will be bringing their reading book home on Thursday, please return the book to school on Monday. It is important you return your child's book on Monday so the book can be quarantined for 72 hours.