

Daily non-negotiables:

1) Reading - 30 minutes

Group 1:

- [Phonics sounds](#)
- [Spell the words](#)
- [Read to an adult](#)

Group 2:

- [Phonics sounds](#)
- [Spell the words](#)
- [Read to an adult](#)
- Reading skills - Comprehension

2) Spelling - 20 minutes

3) P.E. - [Cosmic Kids](#)

English

Description- Feelings

Diary entries can be used to write about our **feelings**. How do you think Robert Falcon Scott felt in the South Pole and why? Write sentences to show this in your workbook. You can use your word mat from yesterday with good feelings and bad feelings.

e.g. I am feeling frightened because I am far away from home.

Maths

Find the difference

Watch the video, complete the activities and check your answers.

[Video](#)

[Worksheet](#)

[Answers](#)

Topic

Comparing Journeys


What are the differences between explorations now and in the past?

Use the 'Comparing Journeys' table to compare the explorers [Christopher Columbus](#) and [Neil Armstrong](#).

Use the links and internet research to help you.

Reading skills: Reading Comprehension

Comprehension is understanding a text. Carefully read the text from Monday and answer the questions. You can find clues in the text to help you.



Christopher Columbus Questions

1. When was Christopher Columbus born?

2. What was Christopher's dream?

3. What were the ships he sailed made of?

4. How old was he on his first trip to sea?

5. Where did the sailors sleep?

6. What did they call the new lands?

7. Where did he end up in 1502?

8. What happened to him in 1506?

Find the difference

1 Teddy and Annie each have some money.

a) Teddy has this money.



How much money does Teddy have?

 p

b) Annie has this money.



How much money does Annie have?

 p

c) How much more money does Annie have than Teddy?

How did you work this out?



2 Rosie has this money.



She wants to buy this packet of sweets.

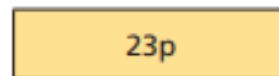


How much more money does Rosie need?

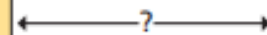
3 Work out the difference between the cost of a bottle of water and a lollipop.



58p



23p



- 4 Dora and Mo each have some money.



Dora

I have two £10 notes
and three £1 coins.

I have one £20
note, one £5 note and
two £2 coins.



Mo

Who has more money? _____

How much more money do they have?

- 5 Jack has been to the cinema and bowling.



How much more did Jack spend to go to the
cinema than to go bowling?



- 6 Esther has £3 and 67p.

Nijah has £3 and 15p.

Brett has £8 and 67p.

a) Who has the most money? _____

b) How much more money does Esther have
than Nijah?

c) How much more money does Brett have
than Esther?

- 7 Tom and Whitney each have £5 and 84p.

a) Tom spends some money.

Now he has £5 and 7p.

How much did Tom spend?

b) Whitney also spends some money.

Now she has £5 and 23p.

How much more did Tom spend than
Whitney?



Comparing journeys



**Christopher
Columbus**
1492
Columbus' first
voyage



**Neil
Armstrong**
1969
The first Moon
landing

	Christopher Columbus	Neil Armstrong
Destination		
Transport		
Technology		
Reasons for the journey		
Discoveries		