

Daily non-negotiables:

1) Reading - 30 minutes

Group 1:

- [Phonics sounds](#)
- [Spell the words](#)
- [Read to an adult](#)

Group 2:

- [Phonics sounds](#)
- [Spell the words](#)
- [Read to an adult](#)
- Reading skills - Comprehension

2) Spelling - 20 minutes

3) P.E. - [Cosmic Kids](#)

English

Plan a recount

Make a recount plan to help you with your writing tomorrow. Look at the WAGOLL timeline and complete your own.

Think: What did you do first? Next? Then? After that? Etc.

Maths

Add equal groups

Watch the video, complete the activities and check your answers.

[Video](#)

[Worksheet](#)

[Answers](#)

PSHE

Staying safe online

Watch the [Jesse and Friends](#) videos about staying safe online.

In Episode 3, they learn to keep their information private, only talk to people they know in real life and to tell an adult when something worries them.



Make a poster on internet safety.

Challenge: Sing the funny in your tummy song and upload to your portfolio!

Reading skills: Reading Comprehension

Comprehension is understanding a text. Carefully read the text from Monday and answer the questions. You can find clues in the text to help you.



Safer Internet Day 2021

Questions

1. When is Safer Internet Day? Tick one.

- on Tuesday 9th February
- on Saturday 9th January
- a day to stay safe online

2. What useful things can we do on the Internet? Tick **two**.

- play games
- learn new facts
- brush your teeth

3. Find and copy one word that means 'someone you don't know'.

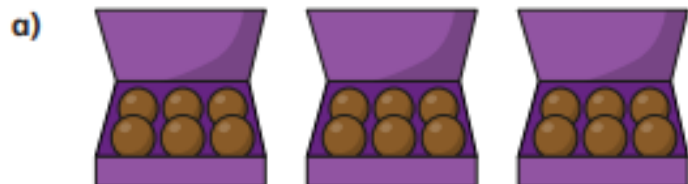
4. Who can use the Internet to post pictures, videos or comments?

5. Who should you tell if you feel upset online?

- a stranger
- a pet
- an adult

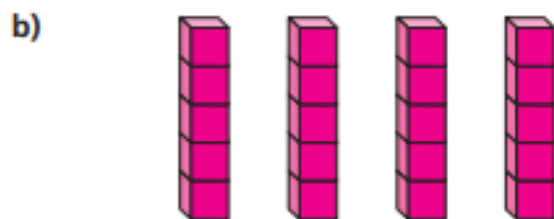
Add equal groups

1 Complete the sentences.



There are equal groups with
in each group.

$$\square + \square + \square = 18$$



There are equal groups with
in each group.

$$\square + \square + \square + \square = 20$$

2 Write a number sentence to match the picture.





3 Rosie has 20p.

How many 10p coins could she have?

How many 5p coins could she have?

How many 2p coins could she have?



- 4 Draw a picture to represent the number sentence.

a) $8 + 8 = 16$

b) $2 + 2 + 2 = 6$



- 5 Dexter has five of the same coins.
How much money does Dexter have if these are the coins?

a) Dexter has five 1p coins.

b) Dexter has five 2p coins.

c) Dexter has five 5p coins.

d) Dexter has five 10p coins

- 6 Complete the sentences.

a) $3 + 3 + 3 + 3 = 12$

There are equal groups with
in each group.

b) $2 + 2 + 2 + 2 + 2 + 2 + 2 = 14$

There are equal groups with
in each group.

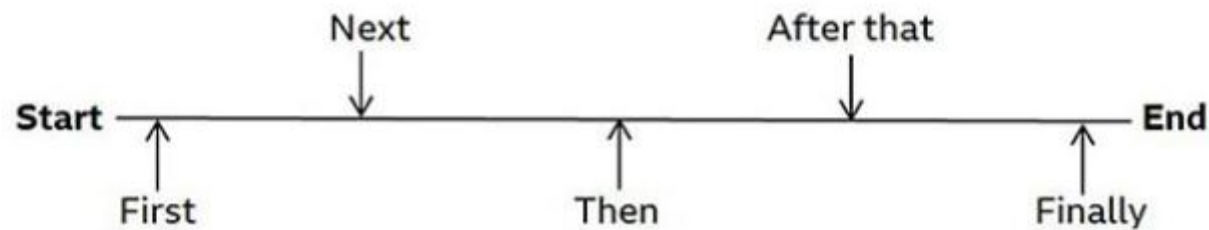


Let's recount a day in your life!

Recounts are usually about something that **really happened** to you (like a visit somewhere, or a special day).

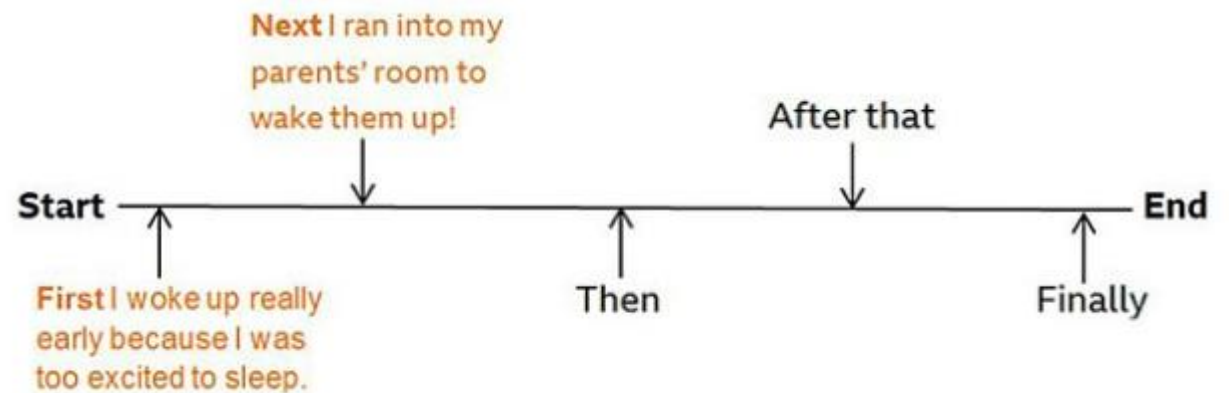
They should be written in the order they actually happened.

For this task you are going to plan a recount on a timeline like this.



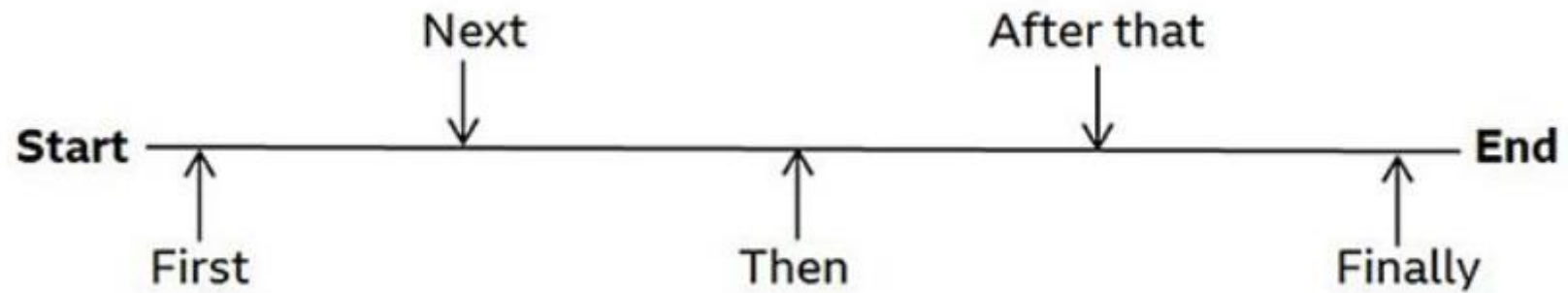
Think about a day in half term that you would like to write a recount about.

Think about what happened and in what order and draw your own timeline. Like this:



My recount plan:

A day in half term



Use the frame below to create your own poster about internet safety.



Internet Safety



n p t l l o r t t w
s c s s a f e t y v
g d d f m f j d c v
n r r n s a e d a i
i e o l p c e e n v r
t t w i a e z e i u
t t s q m b v i r s
e i s d p o t r p d
s w a s a o o f k u
j t p y a k u u p t



settings
safety
twitter
passwords
friend

spam
privacy
facebook
troll
virus

