

12 times table

Name: _____

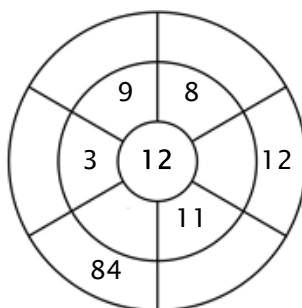
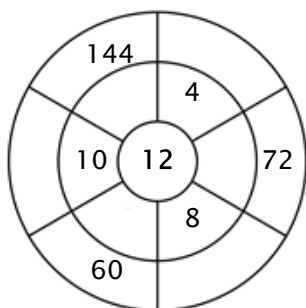
Exercise 1:

Color in all of the boxes that are the solutions of this time table.

65	110	72	132	48
86	12	74	84	108
48	144	99	120	84
33	96	24	108	60
112	56	36	120	11

Exercise 2:

Complete the circle by multiplying the number in the center by the middle ring to get the outer numbers.



Exercise 3:

Fill in the correct product.

a) $8 \times 12 = \underline{\quad}$

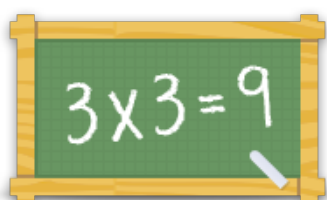
b) $5 \times 12 = \underline{\quad}$

c) $3 \times 12 = \underline{\quad}$

d) $7 \times 12 = \underline{\quad}$

e) $12 \times 12 = \underline{\quad}$

f) $11 \times 12 = \underline{\quad}$



For more worksheets, games and exercises:
www.timestables.co.uk