

# 8 times table

Name: \_\_\_\_\_

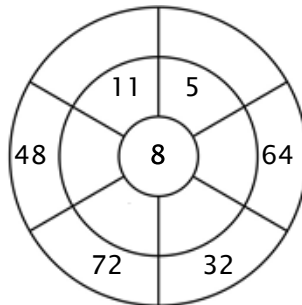
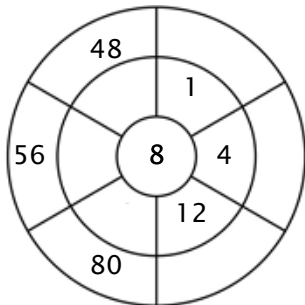
## Exercise 1:

Color in all of the boxes that are the solutions of this time table.

95	32	16	55	48
33	8	64	72	1
7	22	48	64	23
80	56	80	24	96
88	45	96	24	21

## Exercise 2:

Complete the circle by multiplying the number in the center by the middle ring to get the outer numbers.



## Exercise 3:

Fill in the correct product.

a)  $9 \times 8 = \underline{\quad}$

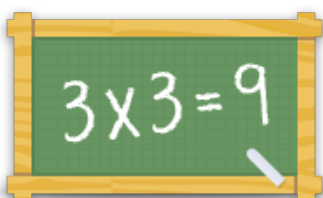
b)  $10 \times 8 = \underline{\quad}$

c)  $7 \times 8 = \underline{\quad}$

d)  $3 \times 8 = \underline{\quad}$

e)  $1 \times 8 = \underline{\quad}$

f)  $2 \times 8 = \underline{\quad}$



For more worksheets, games and exercises:  
[www.timestables.co.uk](http://www.timestables.co.uk)