

2 times table

Name: _____

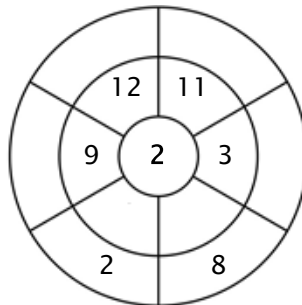
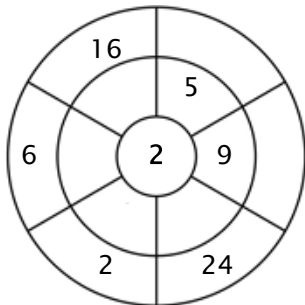
Exercise 1:

Color in all of the boxes that are the solutions of this time table.

12	10	14	11	9
22	23	4	24	14
16	18	19	16	25
22	18	1	37	20
3	2	10	5	12

Exercise 2:

Complete the circle by multiplying the number in the center by the middle ring to get the outer numbers.



Exercise 3:

Fill in the correct product.

a) $6 \times 2 = \underline{\quad}$

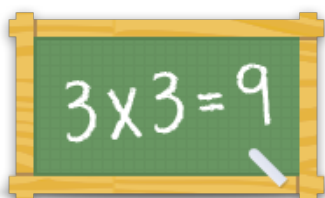
b) $1 \times 2 = \underline{\quad}$

c) $9 \times 2 = \underline{\quad}$

d) $10 \times 2 = \underline{\quad}$

e) $8 \times 2 = \underline{\quad}$

f) $2 \times 2 = \underline{\quad}$



For more worksheets, games and exercises:
www.timestables.co.uk