

9 times table

Name: _____

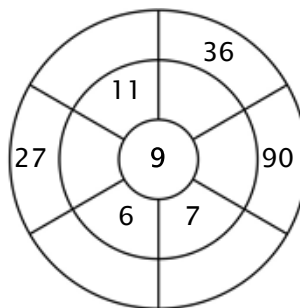
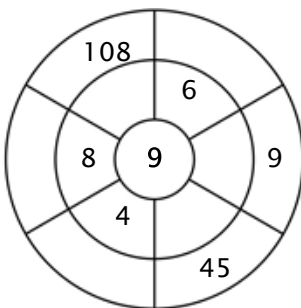
Exercise 1:

Color in all of the boxes that are the solutions of this time table.

11	79	72	90	8
37	54	54	18	5
9	81	45	27	69
27	90	36	99	65
18	108	59	45	19

Exercise 2:

Complete the circle by multiplying the number in the center by the middle ring to get the outer numbers.



Exercise 3:

Fill in the correct product.

a) $6 \times 9 = \underline{\quad}$

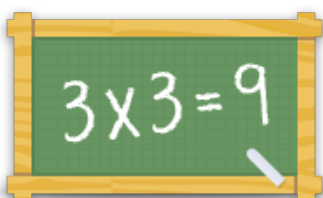
b) $2 \times 9 = \underline{\quad}$

c) $1 \times 9 = \underline{\quad}$

d) $3 \times 9 = \underline{\quad}$

e) $10 \times 9 = \underline{\quad}$

f) $8 \times 9 = \underline{\quad}$



For more worksheets, games and exercises:
www.timestables.co.uk