

3 times table

Name: _____

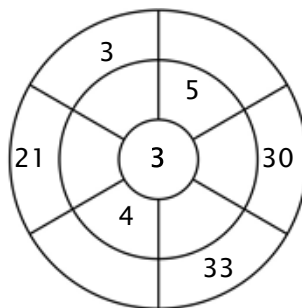
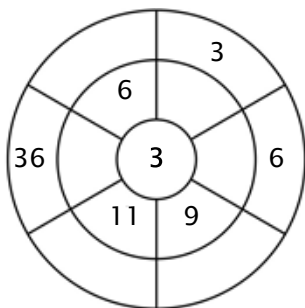
Exercise 1:

Color in all of the boxes that are the solutions of this time table.

12	7	16	28	3
36	30	18	38	21
18	33	2	22	8
4	30	29	3	36
9	33	11	1	25

Exercise 2:

Complete the circle by multiplying the number in the center by the middle ring to get the outer numbers.



Exercise 3:

Fill in the correct product.

a) $4 \times 3 = \underline{\quad}$

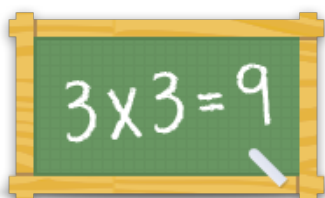
b) $1 \times 3 = \underline{\quad}$

c) $11 \times 3 = \underline{\quad}$

d) $9 \times 3 = \underline{\quad}$

e) $12 \times 3 = \underline{\quad}$

f) $6 \times 3 = \underline{\quad}$



For more worksheets, games and exercises:
www.timestables.co.uk