

11 times table

Name: _____

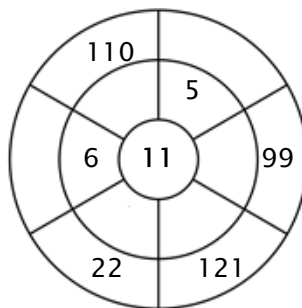
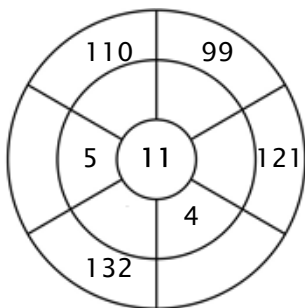
Exercise 1:

Color in all of the boxes that are the solutions of this time table.

121	66	132	77	82
25	121	110	11	33
90	12	44	132	50
55	88	3	80	72
22	110	44	39	77

Exercise 2:

Complete the circle by multiplying the number in the center by the middle ring to get the outer numbers.



Exercise 3:

Fill in the correct product.

a) $3 \times 11 = \underline{\quad}$

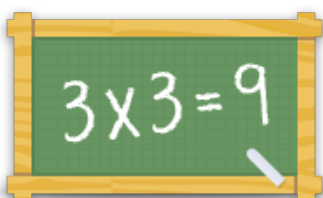
b) $8 \times 11 = \underline{\quad}$

c) $6 \times 11 = \underline{\quad}$

d) $11 \times 11 = \underline{\quad}$

e) $2 \times 11 = \underline{\quad}$

f) $9 \times 11 = \underline{\quad}$



For more worksheets, games and exercises:
www.timestables.co.uk