

# 1 times table

Name: \_\_\_\_\_

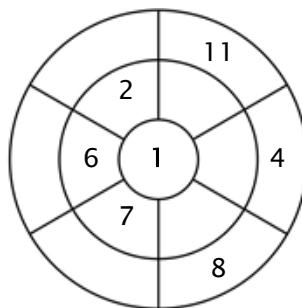
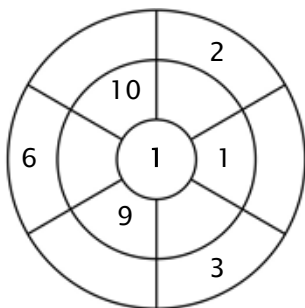
## Exercise 1:

Color in all of the boxes that are the solutions of this time table.

17	10	33	23	22
4	8	11	45	8
2	2	11	7	3
9	6	14	6	9
25	50	7	1	5

## Exercise 2:

Complete the circle by multiplying the number in the center by the middle ring to get the outer numbers.



## Exercise 3:

Fill in the correct product.

a)  $2 \times 1 = \underline{\quad}$

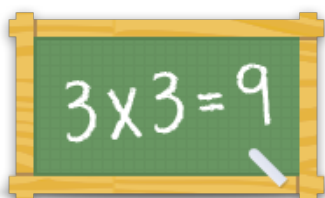
b)  $9 \times 1 = \underline{\quad}$

c)  $1 \times 1 = \underline{\quad}$

d)  $8 \times 1 = \underline{\quad}$

e)  $11 \times 1 = \underline{\quad}$

f)  $3 \times 1 = \underline{\quad}$



For more worksheets, games and exercises:  
[www.timestables.co.uk](http://www.timestables.co.uk)