

Mental mathematics Test C

First name

Last name

School _____

Total marks

Practice question

		25	
--	--	----	--

Time: 5 seconds

1		
2		
3		
4	feet	151 feet
5		33
6	seconds	
7		920

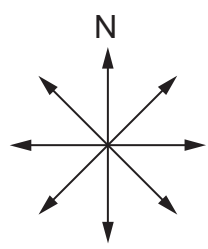
Time: 5 seconds continued

8		-7	8
---	--	------	---

9		$3d - d$	9
---	--	----------	---

Time: 10 seconds

10	pupils	£24	£6	10
----	--------	-----	----	----

11		
----	--	--

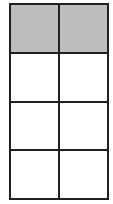
12		24	50	12
----	--	----	----	----

13	£	£11	13
----	---	-----	----

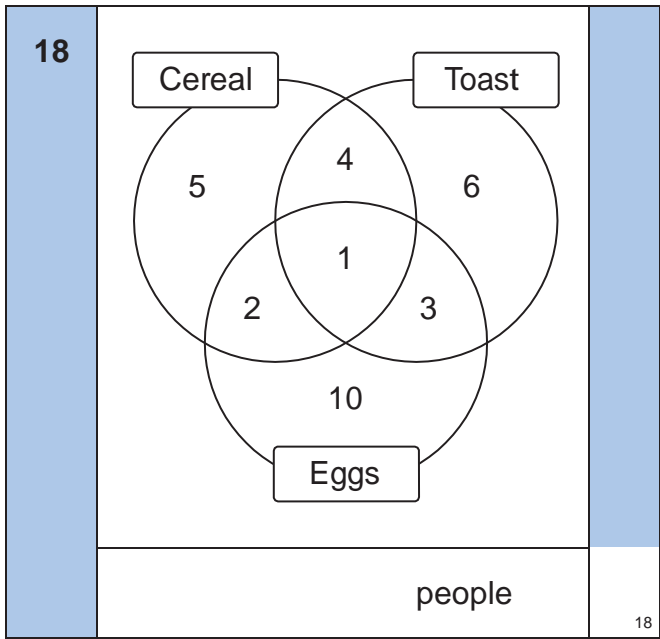
14		$16 + x = 23$	14
----	--	---------------	----

15		3.7	0.5	15
----	--	-----	-----	----

16	_____	5	8	5	
		5	8	7	
		5	6	6	

17	_____ %		
----	---------	---	--

Time: 10 seconds continued

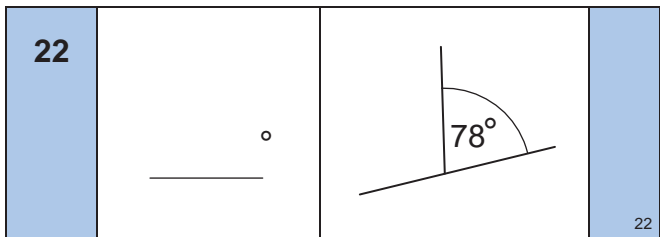
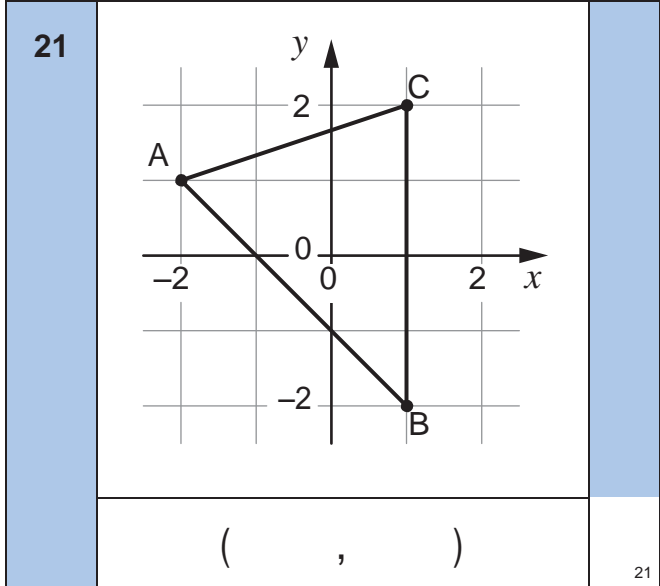


19

	9	12	19
--	---	----	----

20

		20
--	--	----



23

	7	23
--	---	----

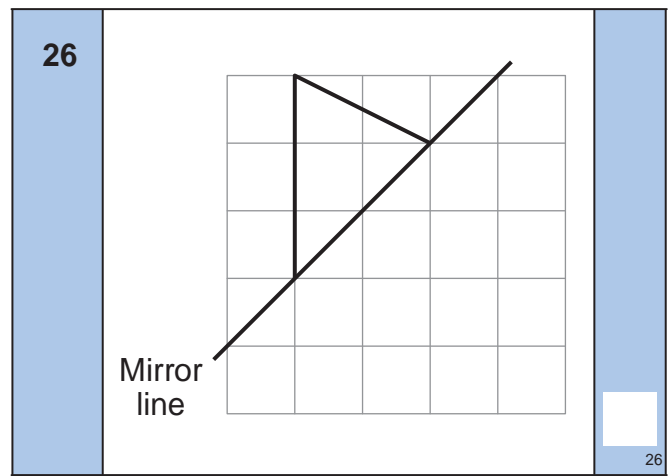
Time: 15 seconds

24

With a calculator	
Without a calculator	
pupils	
24	

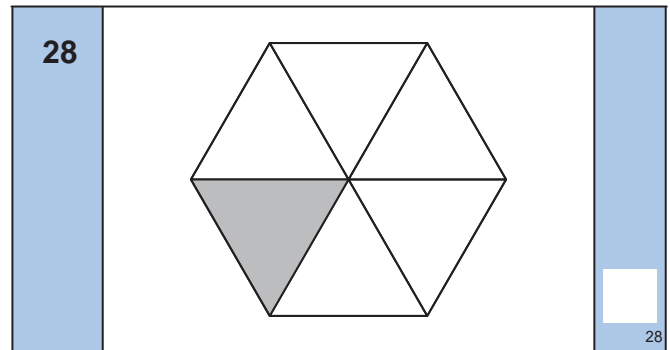
25

	p	60p	25
--	---	-----	----



27

$132 \div 6 = 22$	
$132 \div 3 =$	
27	



29

£	£1.45	29
---	-------	----

30

cm	6cm	30cm^2	30
----	-----	-----------------	----