

Mental mathematics Test C

Firstname \_\_\_\_\_

Lastname \_\_\_\_\_

School \_\_\_\_\_

Total marks

Practice question

		49	
--	--	----	--

Time: 5 seconds

1		67 14	
---	--	-------	--

2			
---	--	--	--

3		19	
---	--	----	--

4		4266	
---	--	------	--

5		6 7	
---	--	-----	--

6		$7k - 4k$	
---	--	-----------	--


7		$\frac{1}{4}$	
---	--	---------------	--

8		0.8 5	
---	--	-------	--

Time: 10 seconds



9	2010	2001	2100	
	2110	2101		<input type="text"/>

10		14	15	16	
----	--	----	----	----	--


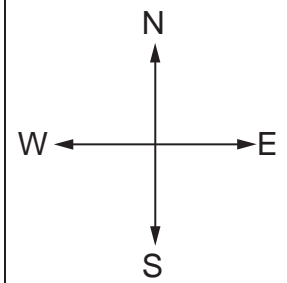
11		
	£	<input type="text"/>

12		train	bus	
	adult	£2.00	£1.20	
	child	£1.00	40p	
	£			<input type="text"/>

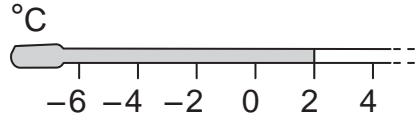
13		25th July	
----	--	-----------	--

14	men			
	women			
	$\text{stick figure} = 25 \text{ people}$			
	<input type="text"/>			<input type="text"/>

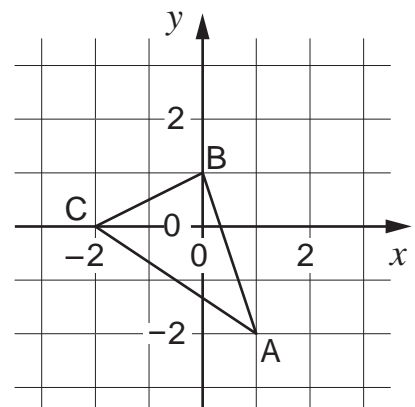
15		3 3 <sup>2</sup>	
----	--	------------------	--

16			
	_____		<input type="text"/>

Time: 10 seconds continued

17  17

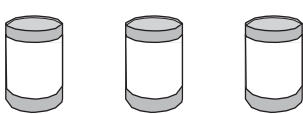
18 8km      5 miles  
miles 18

19   
(      ,      ) 19

20  $\sqrt{81}$  20

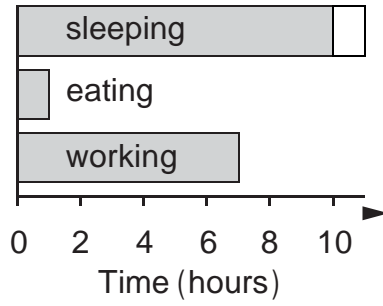
21  $5b + 3$  21

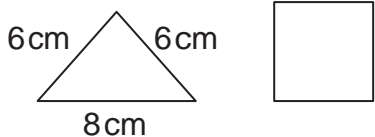
Time: 15 seconds

22   
3 tins for 99p  
£ 22

23 23

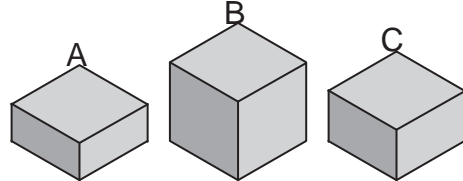
Time: 15 seconds continued

24  24

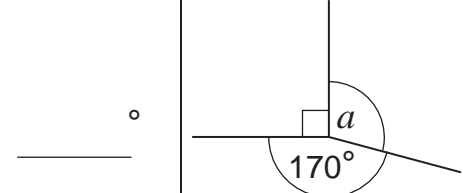
25   
cm 25

26 1, 3, 6, 10, 15, \_\_\_\_\_ 26

27 1 red      1 green      3 blue 27

28   
450g      950g  
g 28

29  $29 \times 34 = 986$   
 $0.29 \times 34 =$  29

30  30