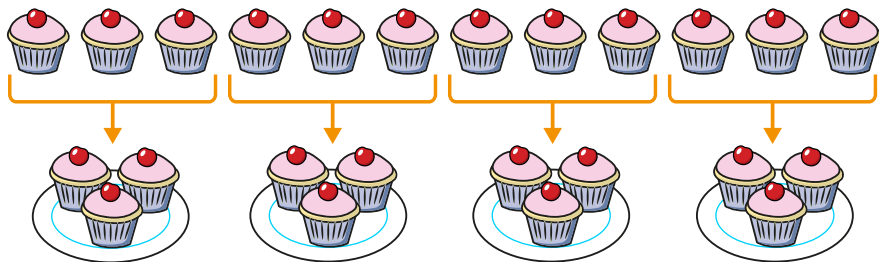


1 Here are 12 cakes.




Complete the sentences.

There are plates.

Each plate has cakes.

12 shared into equal groups is

2 Circle groups of 4 flowers.



a) How many groups of 4 flowers did you make?

b) Complete the sentence.

There are groups of 4 in 16



3 Eva makes an array with 32 counters.

a) How many groups of 4 are in the array?

b) Use this to work out $32 \div 4$

4 A farmer has 24 apples.

He wants to pack the apples equally into 4 bags.


How many apples will be in each bag?

5 There are 20 muffins.

4 muffins fit in 1 box.

Use a number line to work out how many boxes can be filled.

6 Alex is trying to divide 48 by 4



To multiply by 4, you can double the number and double again.

To divide a number by 4, I think you can halve the number and halve it again.

Use an array to show that Alex's method works.

Does Alex's method always work?

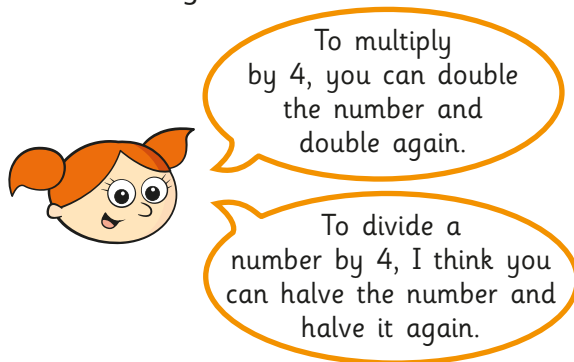


- 3 Eva makes an array with 32 counters.
- How many groups of 4 are in the array?
 - Use this to work out $32 \div 4$

- 4 A farmer has 24 apples.
He wants to pack the apples equally into 4 bags.
How many apples will be in each bag?

- 5 There are 20 muffins.
4 muffins fit in 1 box.
Use a number line to work out how many boxes can be filled.

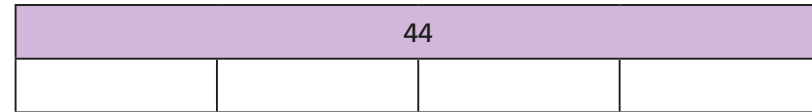
- 6 Alex is trying to divide 48 by 4



Use an array to show that Alex's method works.
Does Alex's method always work?



- 7 Complete the bar model.



Complete the division statement to match the bar model.

$$44 \div \square = \square$$

- 8 Mo is working out whether numbers divide equally by both 2 and 4

Complete the table and continue the pattern.

The first one has been done for you.

Number	Divided equally by 2 is . . .	Divided equally by 4 is . . .
2	1	does not divide equally
4		
6		
8		
10		
12		

What do you notice?