

**LO: To know the 8 points of a compass.**

For this lesson I would like you to watch this video:

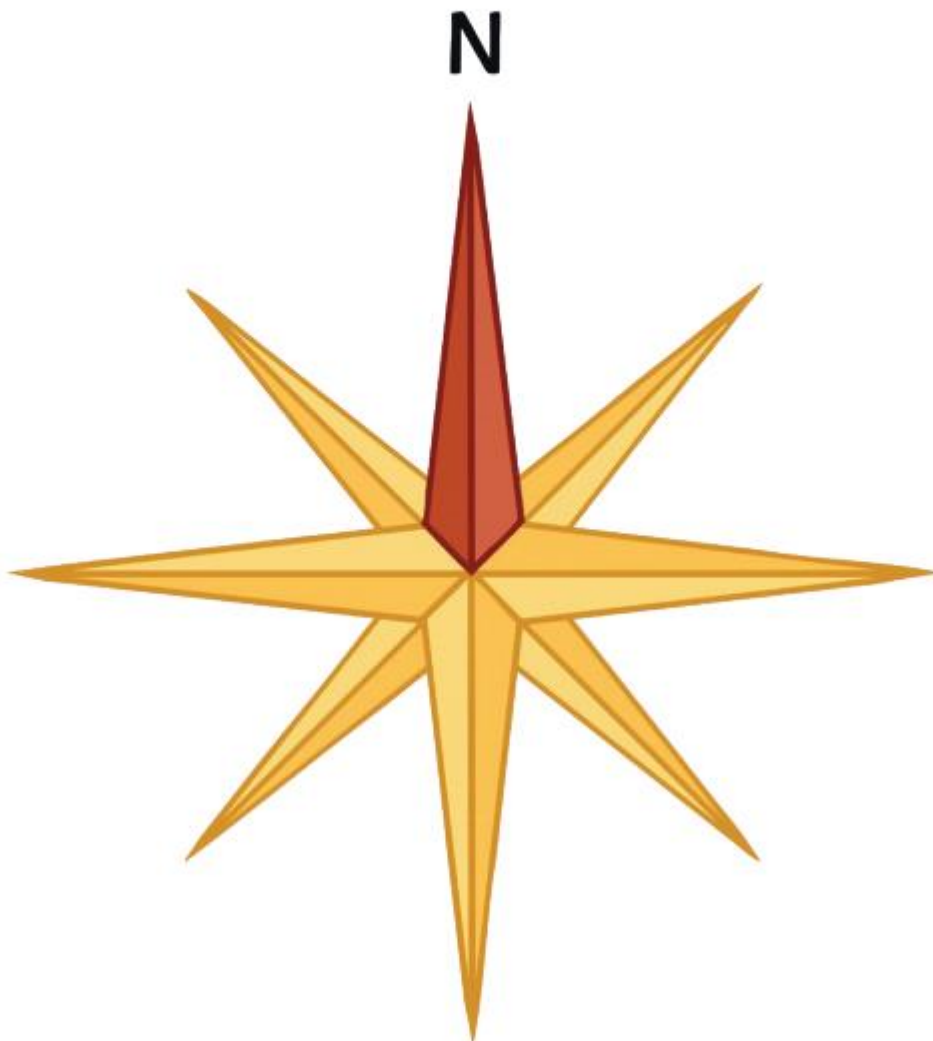
<https://www.youtube.com/watch?v=io5sLXsnm3A>

[https://www.youtube.com/watch?v=\\_4b9tVmmFJE](https://www.youtube.com/watch?v=_4b9tVmmFJE)






















Then complete the 2 tasks below.

## Compass Rose

Label the eight points of the compass.



## Compass Directions

		bakery 			mosque 	
church 		park 		hospital 		
	taxi rank 		post box 			café 
fire station 		toy shop 		airport 		
	school 		vets 		pool 	
fair 		police station 				beach 
bus stop 		dentist 	<b>Start</b> 		supermarket 	

### Compass directions: the town

1. From the start , go NORTH 4 squares. Where are you now?
2. Go NORTH-EAST 1 square. Where are you now?
3. Go SOUTH 2 squares. Where are you now?
4. Go WEST 4 squares. Where are you now?
5. Go SOUTH-EAST 2 squares. Where are you now?
6. Start at the school. How do you get to the fair?
7. Direct someone from the fair to the hospital.
8. Write directions from somewhere on the map to another place.

