





Maths Tasks

Monday

- 1 Dora makes a number on a place value chart.

Th	H	T	O
			

- What number has Dora made?
- Add 3 ones to Dora's number.
What number do you have?
- Add 2 tens to Dora's number.

Work out the calculations.

- Can you now complete these questions?
 - $6,1305+10=$
 - $6,1245+100=$
 - $6,1670+30=$
 - $4678+2000=$
 - $5,5698+200=$

Tuesday

a) Calculate $3,214 + 5,122$

Use the place value chart to help you.

	Th	H	T	O
+	1,000 1,000 1,000	100 100	10	1 1 1 1
	1,000 1,000 1,000	100	10 10	1 1

b) Now calculate $3,214 + 122$ in the same way.

Using a **number line** to show your working complete...

$$3345 + 652 =$$

$$5423 + 265 =$$

$$9658 + 171$$

Using the **column method** complete the following...

$$4589 + 652 =$$

$$2568 + 689 =$$

$$9854 + 127 =$$

$$6582 + 356 =$$

$$8452 + 198 =$$