




Maths Challenge

Challenge Cards



Maths Challenge


1. Which box holds 10 apples?



twinkl.com

Maths Challenge

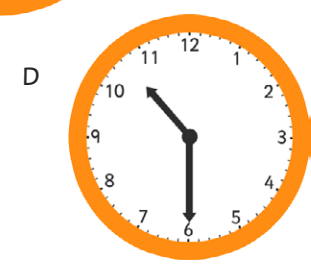

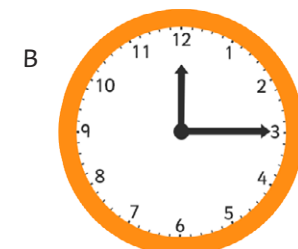
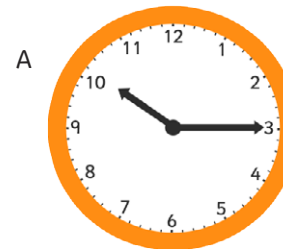
2. Which pizza has been cut into quarters?



twinkl.com

Maths Challenge

3. Which clock shows 10:30?



twinkl.com

Maths Challenge

4. Is the spinner more likely to land on red or yellow?



Maths Challenge

5. Which shape is a triangle?



Maths Challenge

6. Look at this pattern:

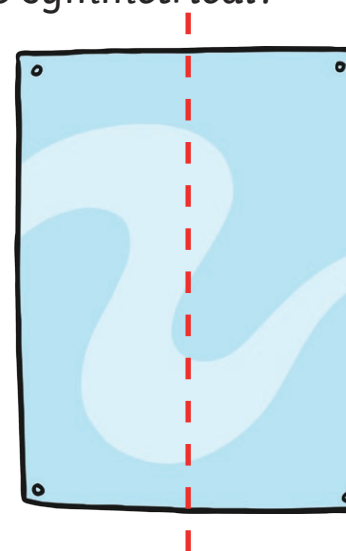
Which is the correct ending?



- A
- B
- C

Maths Challenge

7. Is the picture symmetrical?



Maths Challenge

8. Can you add these coins together?

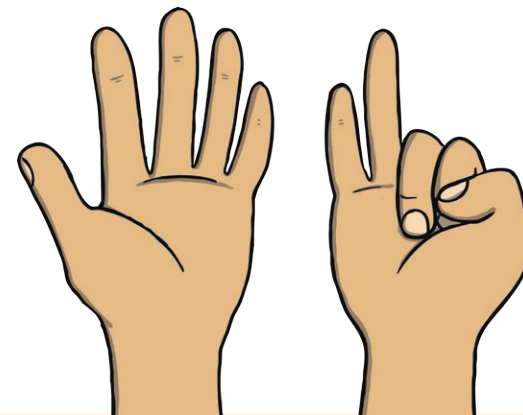
How much is there?



Maths Challenge


9. How do you write this number using letters: 7

- a) four
- b) nine
- c) six
- d) seven



Maths Challenge

10. Which pie has been cut into equal parts?



Maths Challenge

11. Put these numbers in order, from least to greatest.



Maths Challenge

12. How many corners does this shape have?

