

Number Shape Addition to 20

Use the number shapes to work out the answers to each addition question.

$$\begin{array}{|c|} \hline \bigcirc & \bigcirc \\ \hline \bigcirc & \bigcirc \\ \hline \bigcirc & \bigcirc \\ \hline \end{array} + \begin{array}{|c|} \hline \bigcirc & \bigcirc \\ \hline \end{array} = \square$$

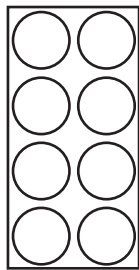
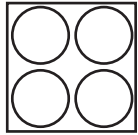

$$\begin{array}{|c|} \hline \bigcirc & \bigcirc \\ \hline \bigcirc & \bigcirc \\ \hline \bigcirc & \bigcirc \\ \hline \bigcirc & \bigcirc \\ \hline \end{array} + \begin{array}{|c|} \hline & \bigcirc \\ \hline \bigcirc & \bigcirc \\ \hline \end{array} = \square$$


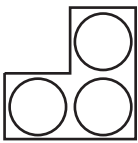

$$\begin{array}{|c|} \hline & \bigcirc \\ \hline \bigcirc & \bigcirc \\ \hline \bigcirc & \bigcirc \\ \hline \end{array} + \begin{array}{|c|} \hline \bigcirc & \bigcirc \\ \hline \bigcirc & \bigcirc \\ \hline \end{array} = \square$$


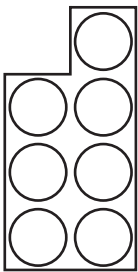

$$\begin{array}{|c|} \hline & \bigcirc \\ \hline \bigcirc & \bigcirc \\ \hline \bigcirc & \bigcirc \\ \hline \bigcirc & \bigcirc \\ \hline \end{array} + \begin{array}{|c|} \hline & \bigcirc \\ \hline \bigcirc & \bigcirc \\ \hline \bigcirc & \bigcirc \\ \hline \end{array} = \square$$

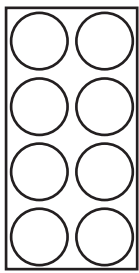


$$\begin{array}{|c|} \hline & \bigcirc \\ \hline \bigcirc & \bigcirc \\ \hline \bigcirc & \bigcirc \\ \hline \bigcirc & \bigcirc \\ \hline \bigcirc & \bigcirc \\ \hline \end{array} + \begin{array}{|c|} \hline \bigcirc \\ \hline \end{array} = \square$$


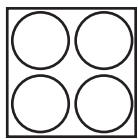

$$\begin{array}{|c|} \hline \bigcirc & \bigcirc \\ \hline \bigcirc & \bigcirc \\ \hline \bigcirc & \bigcirc \\ \hline \bigcirc & \bigcirc \\ \hline \bigcirc & \bigcirc \\ \hline \end{array} + \begin{array}{|c|} \hline \bigcirc & \bigcirc \\ \hline \end{array} = \square$$




 $+$  $=$ 

 $+$  $=$ 

 $+$  $=$ 

 $+$  $=$ 

 $+$  $=$ 

 $+$  $=$ 

$$\begin{array}{|c|c|c|c|} \hline & & & \circ \\ \hline \circ & \circ & \circ & \circ \\ \hline \circ & \circ & \circ & \circ \\ \hline \end{array} + \begin{array}{|c|c|c|c|} \hline & & & \circ \\ \hline \circ & \circ & \circ & \circ \\ \hline \circ & \circ & \circ & \circ \\ \hline \end{array} = \square$$

$$\begin{array}{|c|c|} \hline & \circ \\ \hline \circ & \circ \\ \hline \circ & \circ \\ \hline \circ & \circ \\ \hline \end{array} + \begin{array}{|c|c|} \hline \circ & \circ \\ \hline \circ & \circ \\ \hline \circ & \circ \\ \hline \circ & \circ \\ \hline \end{array} = \square$$

$$\begin{array}{|c|c|} \hline \circ & \circ \\ \hline \circ & \circ \\ \hline \circ & \circ \\ \hline \circ & \circ \\ \hline \end{array} + \begin{array}{|c|c|c|c|} \hline & & & \circ \\ \hline \circ & \circ & \circ & \circ \\ \hline \circ & \circ & \circ & \circ \\ \hline \end{array} = \square$$

$$\begin{array}{|c|c|} \hline & \circ \\ \hline \circ & \circ \\ \hline \circ & \circ \\ \hline \circ & \circ \\ \hline \circ & \circ \\ \hline \end{array} + \begin{array}{|c|c|c|c|} \hline & & & \circ \\ \hline \circ & \circ & \circ & \circ \\ \hline \circ & \circ & \circ & \circ \\ \hline \end{array} = \square$$

$$\begin{array}{|c|c|} \hline & \circ \\ \hline \circ & \circ \\ \hline \circ & \circ \\ \hline \circ & \circ \\ \hline \circ & \circ \\ \hline \end{array} + \begin{array}{|c|c|} \hline \circ & \circ \\ \hline \circ & \circ \\ \hline \circ & \circ \\ \hline \circ & \circ \\ \hline \end{array} = \square$$

$$\begin{array}{|c|c|} \hline \circ & \circ \\ \hline \circ & \circ \\ \hline \circ & \circ \\ \hline \circ & \circ \\ \hline \circ & \circ \\ \hline \end{array} + \begin{array}{|c|c|} \hline \circ & \circ \\ \hline \circ & \circ \\ \hline \circ & \circ \\ \hline \circ & \circ \\ \hline \circ & \circ \\ \hline \end{array} = \square$$