

MATHS


WALT – compare mass

Type 'White rose maths year 2' in to google
Scroll down and click on

Summer Term - Week 9 (w/c 22nd June)

Watch the video – lesson 4 compare mass

Lesson 4 - Compare Mass



How many cubes?

Have a go

The castle's mass is [] cubes.

06:35

The video mass is [] cubes

Looking for the worksheets? Contact your child's school to check if they have a subscription to our worksheets. Alternatively, [read more here](#) or get some extra practice from [BBC Bitesize](#).

Here is the link

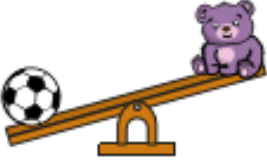
<https://whiterosemaths.com/homelearning/year-2/>

Complete worksheets (respond)

Compare mass


1 Use the words **heavier** or **lighter** to complete the sentences.

a)




The ball is _____ than the teddy.

b)



The tiger is _____ than the lion.

c)




The pear is _____ than the apple.
The apple is _____ than the pear.


White Rose Maths

2 Tick the heavier object on each scale.

a)

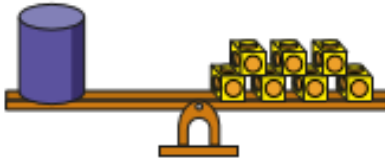


b)




3 What is the mass of each object?

a)



cubes

b)



cubes


c) Which object is heavier? _____

© White Rose Maths 2019


Complete worksheets (respond)

4 Which object is heavier?
Tick your answer.


a)




b)



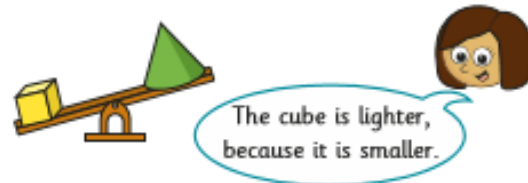
or



or

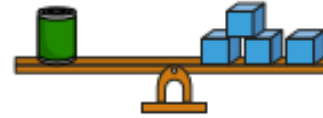


5 Kim puts two objects on the scales.



What mistake has Kim made?

6 Dora balances a tin with blocks.



- a) Complete the sentence.
1 tin has the same mass as blocks.
- b) Explain why these scales do not balance.



7 Which blocks are lighter?
Tick your answer.



Talk about your answer with a partner.