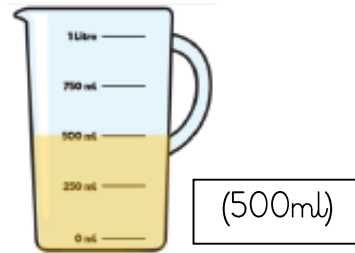


Complete the sentences.



cans of pop are equal to jug of orange juice.

1 can of pop is equal to jug of orange juice.


Lilia has 3 bottles of water with 500ml in each.
Sophie has one bottle of water with 1 and a half l in it.
Who has the most water?



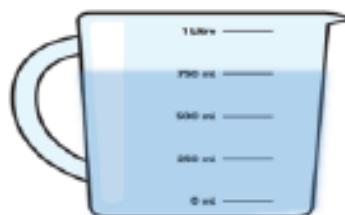
Evie

I know container 1 has more than container 2 in it because the water goes further up the side.

Please let Miss Doone know if the jugs are not clear enough to read!



Container 1



Container 2

Is Evie correct? Explain your answer.