

Maths 2



WALT – divide

Starter:




Divide


Shared
between



Split in to




Cut in to



There are 16 donuts in the staff room. They need to be shared equally between 4 teachers. How many will each teacher get?

Watch video on seesaw to see how I worked this out

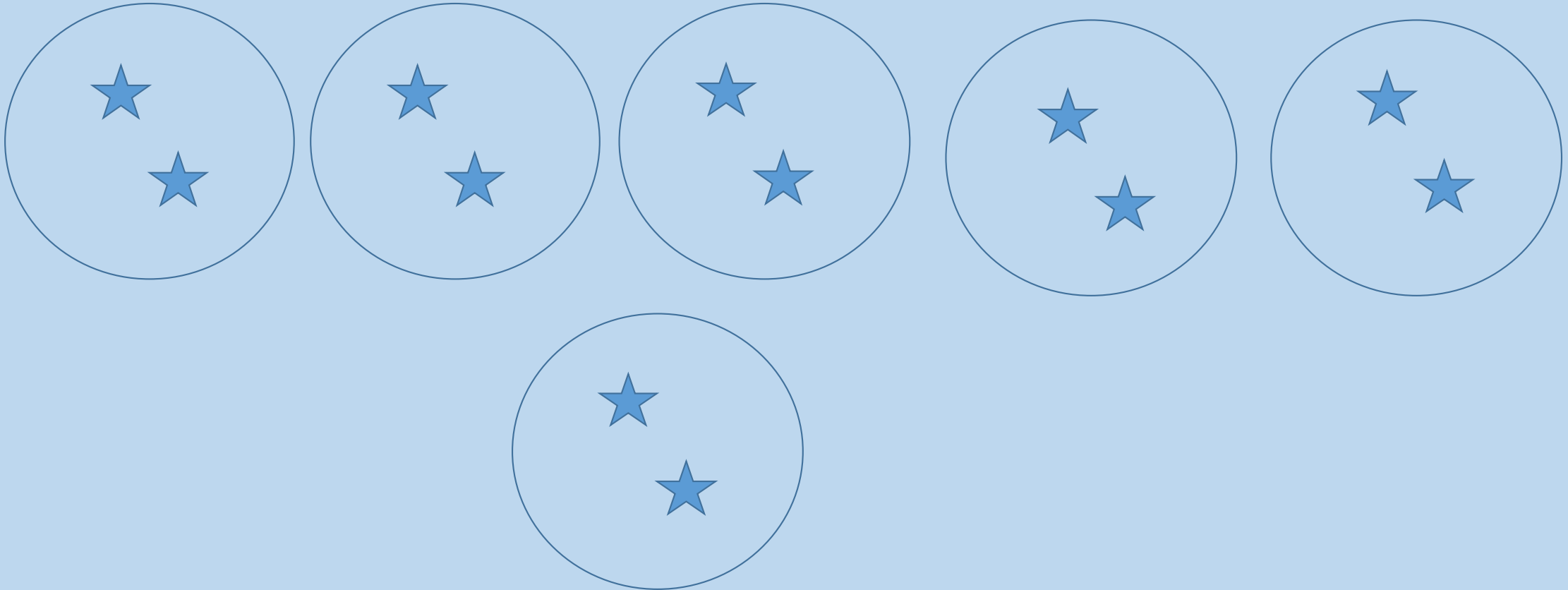


I have got 9 bones to share between 3 dogs! How many will each dog get?

Can you work out the division number sentence and work it out by drawing your groups and dots?

Can you fill in the missing number?

$$12 \div 6 =$$







Can you fill in the missing number?

$$\div 3 = 4$$



Can you fill in the missing number?

$$50 \div \quad = 10$$



Can you work out the answers by drawing your working out?

| | |
|----------------|---------------|
| $2 \div 2 =$ | $4 \div 2 =$ |
| $12 \div 4 =$ | $55 \div 5 =$ |
| $20 \div 10 =$ | $18 \div 2 =$ |
| $42 \div 2 =$ | $6 \div 2 =$ |
| $16 \div 2 =$ | $40 \div 5 =$ |