

Maths 4

WALT – divide using arrays

Starter: Write down all of the number sentences you can think of for this array.




What would an array look like for $6 \div 2 =$

How many will you have altogether?

How many columns will you have?

What would an array look like for $6 \div 2 =$



How many will you have altogether? 6

How many columns will you have? 2

How many are in each column? 3

Can you draw an array for $10 \div 5 =$


How many will you have altogether?

How many columns will you have?

Can you draw an array for $10 \div 5 =$


How many will you have altogether? 10

How many columns will you have? 5



How many are there in each column? 2

Can you draw an array for each of the number sentences on your sheet?

		
$6 \div 2 = 3$	$10 \div 2 =$	$8 \div 2 =$
$14 \div 2 =$	$12 \div 2 =$	$18 \div 2 =$