




There are 100 sweets in each jar.
How many sweets are there altogether?



Complete the number tracks.



Sarah thinks the place value grid is showing the number eight.

Do you agree?
Explain.

Hundreds	Tens	Ones
●● ●● ●● ●●		

If I count in 100s from zero, all of the numbers will be even.
Convince me.