

These activities have been put together as an addition to the packs that have already been sent home.

This is a **non-compulsory** set of activities and have been put together to provide a bit more structure to the day for those who feel they may benefit from it.

Year 1	Day 1	Day 2	Day 3	Day 4	Day 5
Sensory Activity	Wake and shake https://www.youtube.com/watch?v=388Q44ReOWE https://www.youtube.com/watch?v=1gUbdNbu6ak https://www.youtube.com/watch?v=NwT5oX_mqS0	Kids Exercises. https://www.youtube.com/watch?v=3_oIssULEk0	Wake and shake https://www.youtube.com/watch?v=2UcZWXvgMZE https://www.youtube.com/watch?v=oe_HDfdmnaM# https://www.youtube.com/watch?v=83aUaYQF4NM	Kids Exercises. https://www.youtube.com/watch?v=h3Xrtm0IVnY	Wake and Shake. https://www.youtube.com/watch?v=sLMGJ9S0seE https://www.youtube.com/watch?v=I3u_gaOPCGk
Topic	Continue to work on your projects in your packs.				

Phonics

LI - practice and re-cap the phase 5 and focus on the au sound.

Phonics play

Username: march20

Password: home

Flash cards - speed trial all phases-

<https://new.phonicsplay.co.uk/resources/phase/2/flashcards-speed-trials>

Picnic on pluto - phase 5 - au.

<https://new.phonicsplay.co.uk/resources/phase/2/picnic-on-pluto>

Complete the au word search.

au

g	e	l	m	b	s	v	t	t	p	d	p
p	g	p	i	t	e	s	z	i	a	a	a
f	a	u	l	t	u	c	a	j	u	u	u
f	j	c	g	j	g	g	u	a	f	s	n
j	l	a	u	n	t	t	s	u	e	t	c
d	x	A	b	j	l	n	a	p	s	k	h
y	z	h	g	u	o	a	u	c	m	e	h
b	r	h	a	i	z	v	c	h	y	c	q
q	m	v	t	c	k	y	e	j	n	l	p
m	c	u	c	a	u	s	e	u	d	b	l
r	a	n	i	r	z	t	a	f	k	c	g
c	z	s	o	r	j	l	f	b	w	s	q

pause
cause
because
fault

vault
daunt
sauc
paunch

launch
August
caution
flaunt

1	2	3	4	5	6	7	8	9	10
11	12	13	14	15	16	17	18	19	20
21	22	23	24	25	26	27	28	29	30
31	32	33	34	35	36	37	38	39	40

Pobble 365.

<https://www.pobble365.com/the-surprised-mouse/>



Story starter!

- Slowly and cautiously, he raised his small, curious face above the ground, just as he did every morning. His shiny, black eyes surveyed the scene in front and around him, checking that the coast was clear for the start of the breakfast expedition.
- Suddenly, he saw it. Sitting there right in front of him. His eyes widened, transfixed on the sight he saw in front of him, and his jaw dropped, open in astonishment. Was it really there? Were his eyes playing tricks on him?
- Abashedly, he awoke, as if he had been caught in a dream. Twitching his whiskers, he realised that he had to act NOW, unless he was to miss his chance.

Use the link to read the story starter. Please can you write the rest of the story.

What was in front of him?

Why was this his chance?

Did he get his breakfast?

Was the mouse safe?

Use your imagination.

Remember it's a story, so anything could happen!

Remember:

Neat handwriting and finger spaces.

Capital letters and full stops.

Write in sentences.

Say the sentences out loud before writing it to check it makes sense.

Re-read your sentence to check it makes sense still.

Use your phonics to help you sound out and spell words.

Literacy shed.

<https://www.literacyshed.com/caterpillar-shoes.html>



please can you complete the wordsearch and the cater

Caterpillar Shoes

Word Search
Can you find the following words in the word search? Words can read forwards, backwards, up, down, diagonally and can intersect.

beetle, butterfly, caterpillar, clog, earthworm, flea, fly, grasshopper, leaf, shoes, snail, spider, stick insect, twig, woodlouse, woods

s	t	l	i	c	k	i	n	s	e	c	t	e
c	k	t	g	l	w	t	w	f	l	e	a	
p	l	d	r	g	r	a	s	e	s	a	h	
c	a	t	e	r	p	i	l	i	a	r	o	
w	l	r	e	d	i	p	s	t	s	t	p	
f	m	o	r	w	y	l	f	e	n	h	s	
l	n	i	g	l	a	n	s	e	a	w	e	
y	l	f	r	e	t	t	u	b	l	o	o	
s	w	o	o	d	s	l	l	f	l	r	h	
t	l	e	a	f	l	o	u	s	e	m	s	
l	r	e	p	p	o	h	s	s	a	r	g	
c	w	o	o	d	l	o	u	s	e	o	h	

The Literacy Shed © 2020

Caterpillar Shoes

Whose shoes?

In the table there are the names of lots of different mini-beasts and also different types of shoes. Some of these mini-beasts and shoes did not appear in the clip. Can you find these and cross them out.

Now pair-up the remaining mini-beasts with the type of shoe that the caterpillar gave to them by colouring the two squares in the same colour. (Remember that two mini-beasts received 'no shoes' from the caterpillar).

woodlouse	no shoes	welly	spider
earthworm	a trainer	grasshopper	beetle
pumps	earwig	clogs	party shoes
flip flop	a trainer	no shoes	snail
flea	slippers	stick insect	ladybird

Now number each of the mini-beasts from the clip with numbers 1 to 8 to show the order in which they appeared. (Clue: woodlouse = 1, flea = 8)

The Literacy Shed © 2020

Extended writing.

<https://www.literacyshed.com/caterpillar-shoes.html>



Choose whether you would like to be the beetle or the flea. Write a thank you letter to the caterpillar.

Useful vocabulary - grateful, pleased, thrilled, generosity, kindness, happy, enjoying, dancing, exploring, comfortable, beautiful, caterpillar, flea, beetle.

Remember:
Neat handwriting and finger spaces.

Capital letters and full stops.

Write in sentences.

Say the sentences out loud before writing it to check it makes sense.

Re-read your sentence to check it makes sense still.

Use your phonics to help you sound out and spell words.

Phonics.

LI - practice and re-cap the phase 5 sounds and focus on the aw sound.

Phonics play

Username: march20

Password: home

Flash cards - speed trial all phases-

<https://new.phonicsplay.co.uk/resources/phase/2/flashcards-speed-trials>

Dragons Den - Phase 5 - aw.

<https://new.phonicsplay.co.uk/resources/phase/5/dragons-den>

Complete the aw wrksheet.

Colour by Phonics

There are many different words that spell with 'aw'. Can you spot which words are real and which are nonsense below? Fill in your key with a different colour for real words and nonsense words then colour in the correct boxes below.

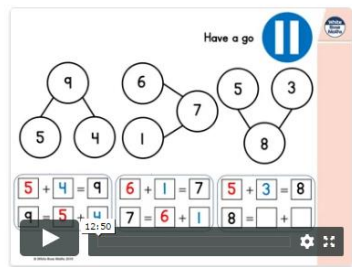
Real Words <input type="checkbox"/>		Nonsense Words <input type="checkbox"/>	
claw	zaw	fawn	thawl
saw	quaw	spraw	lawn
draw	hawm	raw	chawn
yawn	blawn	paw	strawm
yawl	jaw	gawn	drawers

Warm up songs - <https://www.youtube.com/watch?v=bGetqbqDVaA>

<https://www.youtube.com/watch?v=gmeEo-ex8>

LI - Add together and find a part.

Follow the link to watch the video lesson 3
<https://whiterosemaths.com/homelearning/year-1/>



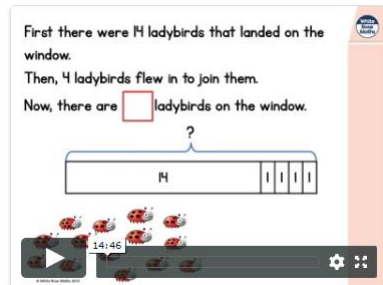
Then complete the worksheet.
<https://wrm-13b48.kxcdn.com/wp-content/uploads/2020/05/Y1-Lesson-3-Find-a-part-2019.pdf>

Warm up songs - <https://www.youtube.com/watch?v=0TgLF3PMOc>

<https://www.youtube.com/watch?v=7stosHbZZZg>

LI - Add more and count on within 20.

Follow the link to watch the video lesson 4.
<https://whiterosemaths.com/homelearning/year-1/>



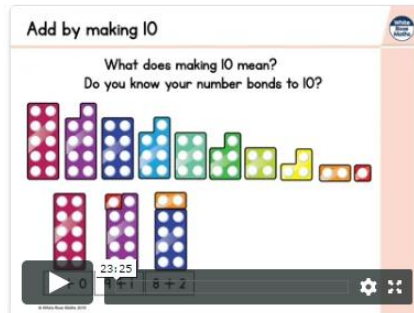
Then complete the worksheet.
<https://wrm-13b48.kxcdn.com/wp-content/uploads/2020/05/Y1-Lesson-4-Add-by-counting-on-2019.pdf>

Warm up songs - <https://www.youtube.com/watch?v=e0dJWfQHF8Y>

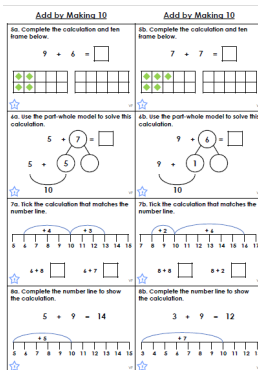
<https://www.youtube.com/watch?v=uYRTtwZGwj8>

LI - add by making 10.

Follow the link to watch the video lesson 1
<https://whiterosemaths.com/homelearning/year-1/>



Then complete the worksheet using the method that you find best.

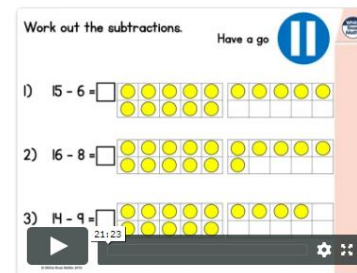


Warm up songs - <https://www.youtube.com/watch?v=Ss-azuApvA0>


<https://www.youtube.com/watch?v=Rd5DBkP9avw&t=89>

LI - Subtract within 20.

Follow the link to watch the video lesson 2.
<https://whiterosemaths.com/homelearning/year-1/>



Then complete the worksheet using the method that you find best.




Warm up songs - <https://www.youtube.com/watch?v=bGetqbqDVaA>

<https://www.youtube.com/watch?v=7stosHbZZZg>

LI - add and subtract word problems.

Follow the link to watch the video lesson 3.
<https://whiterosemaths.com/homelearning/year-1/>



Then complete the worksheet using the method that you find best.




A link to the schools website and Maths Calculation policy:

<http://www.guyhirn.cambs.sch.uk/website/curriculum/66627>

au


g e l m b s v t t p d p
 p g p i t t e s z i a a
 f a u l t u c a j u u n
 j c g j g u g a a f s n n
 f l a u n t t s u e t c
 d x A b j l n a p s k h
 y z h g u o a u c m e h
 b r h a i z v c h y c q
 q m v t c k y e j n l p
 m c u c a u s e u d b l
 r a n i r z t a f k c g
 c z s o r j l f b w s q



pause
 cause
 because
 fault

vault
 daunt
 sauce
 paunch

launch
 August
 caution
 flout



Colour by Phonics

Phase 5 Real and Nonsense Words for aw

There are many different words spelt with 'aw'.

Can you spot which words are real and which are nonsense below?

Fill in your key with a different colour for real words and nonsense words then colour in the correct boxes below

Key

Real Words

Nonsense Words

claw	zaw	fawn	thawl
saw	quaw	spraw	lawn
draw	hawm	raw	chawn
yawn	blawn	paw	strawm
yawl	jaw	gawn	drawers

Caterpillar Shoes

Whose shoes?

In the table there are the names of lots of different mini-beasts and also different types of shoes. Some of these mini beasts and shoes did not appear in the clip. Can you find these and cross them out.

Now pair up the remaining mini beasts with the type of shoe that the caterpillar gave to them by colouring the two squares in the same colour. (Remember that two mini beasts received 'no shoes' from the caterpillar).

woodlouse	no shoes	welly	spider
earthworm	a trainer	grasshopper	beetle
pumps	earwig	clogs	party shoes
flip flop	a trainer	no shoes	snail
flea	slippers	stick insect	ladybird

Now number each of the mini beasts from the clip with numbers 1 to 8 to show the order in which they appeared. (Clue: woodlouse = 1, flea = 8)




Caterpillar Shoes

Word Search

Can you find the following words in the word search? Words can read forwards, backwards, up, down, diagonally and can intersect.

beetle, butterfly, caterpillar, clog, earthworm, flea, fly, grasshopper, leaf, shoes, snail, spider, stick insect, twig, woodlouse, woods

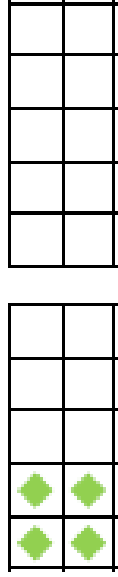
s	t	l	c	k	l	n	s	e	c	t	e
c	k	t	g	l	w	t	w	f	l	e	a
p	l	d	r	g	r	a	s	e	s	a	h
c	a	t	e	r	p	l	l	l	a	r	o
w	l	r	e	d	l	p	s	t	s	t	p
f	m	o	r	w	y	l	f	e	n	h	s
l	n	l	g	l	a	n	s	e	a	w	e
y	l	f	r	e	t	t	u	b	l	o	o
s	w	o	o	d	s	l	l	f	l	r	h
t	l	e	a	f	l	o	u	s	e	m	s
l	r	e	p	p	o	h	s	s	a	r	g
c	w	o	o	d	l	o	u	s	e	o	h



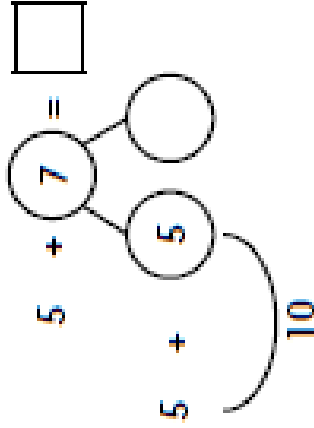
Add by Making 10

5a. Complete the calculation and ten frame below.

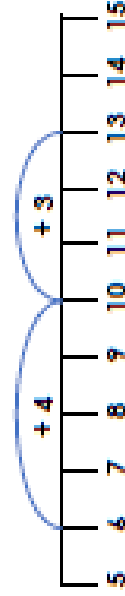
$$9 + 6 = \square$$



6a. Use the part-whole model to solve this calculation.



7a. Tick the calculation that matches the number line.



$$\square + 8$$

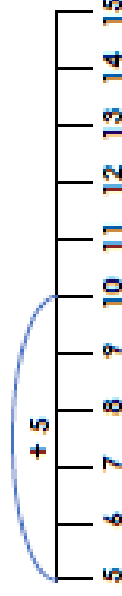


$$6 + 7$$

$$\square + 7$$

8a. Complete the number line to show the calculation.

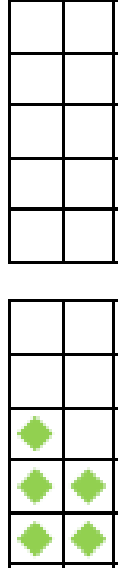
$$5 + 9 = 14$$



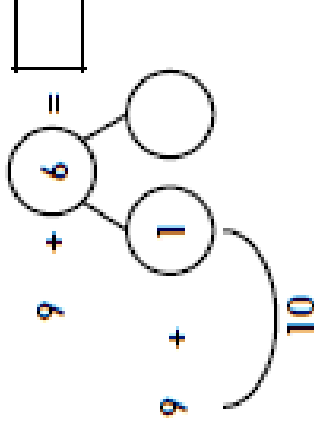
Add by Making 10

5b. Complete the calculation and ten frame below.


$$7 + 7 = \square$$



6b. Use the part-whole model to solve this calculation.



7b. Tick the calculation that matches the number line.



$$8 + 8$$

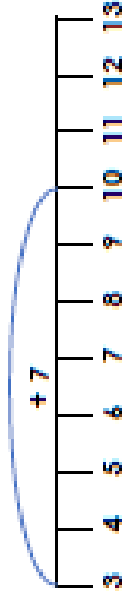


$$\square + 8$$

$$8 + 2$$


8b. Complete the number line to show the calculation.

$$3 + 9 = 12$$




4. Complete the calculations and match each one to the correct ten frame.


1. $15 - 7 = \square$

A. 

2. $15 - 8 = \square$

B. 

3. $15 - 9 = \square$

C. 



VF
HW/Ext



Number Line Subtraction

Example:

$10 - 5 = 5$



$20 - 3 =$



$9 - 4 =$



$18 - 2 =$



$10 - 6 =$



$7 - 3 =$



$2 - 2 =$



$3 - 1 =$



Sammy the giraffe has 16 spots. Timmy the giraffe has 9 spots. How many spots are there in total?



There were 21 stars in space. An alien spaceship zapped 6 away! How many stars were left?



The happy penguin ate 19 fish. His friend ate 5 fish. How many fish did they eat in total?



Jim had 22 sweets. Lee gave him 8 more. How many sweets has Jim got now?



Liz had 19 slices of pizza. She ate 7 slices. How many does she have left now?




Tom had 16 cars. Jen gave him 8 more. How many cars has he got now?



Sam saw 11 rabbits in the field. 7 rabbits hopped away. How many are left in the field?



Jack had 17 magic beans. He accidentally dropped 8. How many does he have left?



Ben cycles 16 miles to school. Bob cycles 21 miles to school. How many miles less does Ben cycle?



Abi plays outside for 15 minutes. Joe plays outside for 22 minutes. How many minutes longer is Joe outside?



Zoe bakes 24 cookies for her friends. Pip eats 6. How many are left?




Ashley had 16 colouring pencils. Joe takes 7 to use. How many does Ashley have left?



Toby catches 13 mice. 7 of the mice escape. How many does Toby have now?



The yellow flower has 10 petals. The blue flower has 3 petals. How many less does the blue flower have?



The villain caught 14 people. The superhero rescued 8. How many does the villain still have?

