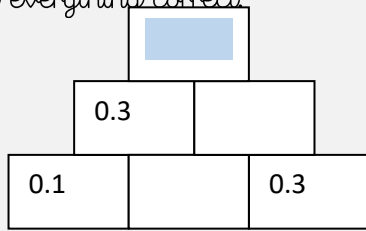


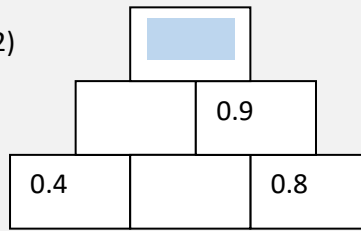
Decimal Walls!

Each blank brick is found by adding the value of the two bricks below. Fill in all the blank bricks. Now add all the top blue bricks together. You will get a 2 digit number with 1 decimal place. Take the 3 digits of this number and add them together. They should total 8 if you have got everything correct.

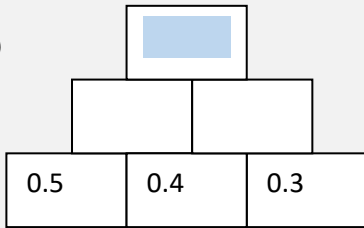
1)



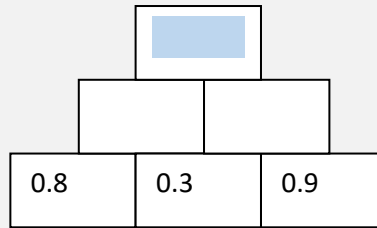
2)



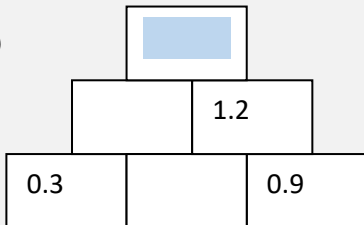
3)



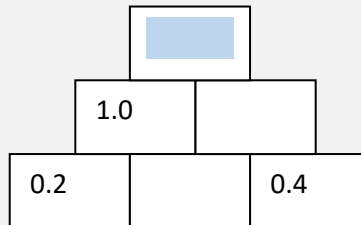
4)



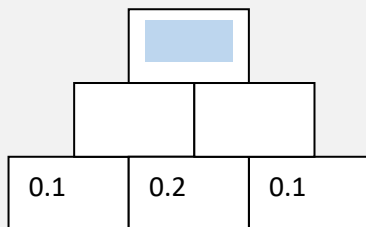
5)



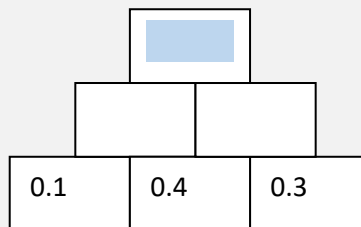
6)



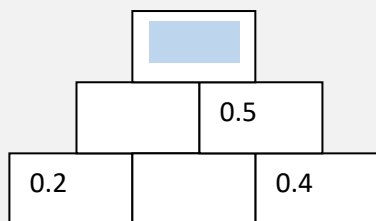
7)



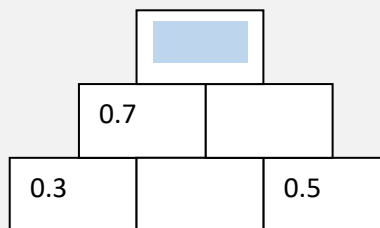
8)



9)



10)



The total of the top boxes is :

I know I am correct because the 3 digits of the answer adds up to 8.