





Flashback 4

1) How many sweets are half the sweets?


2) What is the name of the next shape in the pattern?


3) How many sides does a hexagon have?

4) 20 counters are shared into 5 equal groups.
 How many counters are in each group?

Answers at the bottom of the page.

Friday is challenge day! Or you might like to do something different.

You can find the Friday challenges at:

<https://whiterosemaths.com/homelearning/year-2/> Summer Term - Week 12 Lesson 5

or <https://www.bbc.co.uk/bitesize/dailylessons> Year 2 Friday - Maths

Friday games and activities:

Practise telling the time with this game:

<http://www.ictgames.com/mobilePage/hickoryDickory/>

level 2

or this

<https://www.topmarks.co.uk/Flash.aspx?f=matchingpairstimev3>

select Analogue to words five minute intervals

or this

<https://www.twinkl.co.uk/go/resource/analogue-time-pairing-game-tg-ga-189>


choose 3 stars level for times to five minutes


Play telling the time to five minutes dominoes:

You will need to print and cut out the dominoes at the bottom of the page

You could look at the *Outdoors Maths Challenges* grid and find an activity, or more than one, that you would like to try.



Flashback 4

1) How many sweets are half the sweets?
 3

2) What is the name of the next shape in the pattern?
 cylinder

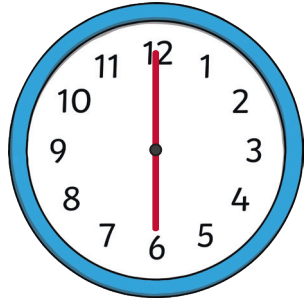
3) How many sides does a hexagon have? 6

4) 20 counters are shared into 5 equal groups.
How many counters are in each group? 4 counters

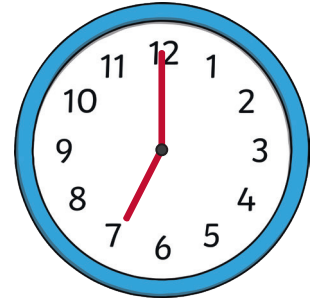


quarter past 5

**5 minutes
to 12**



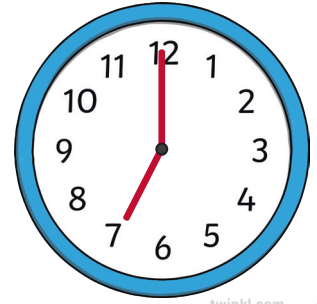
1 o'clock



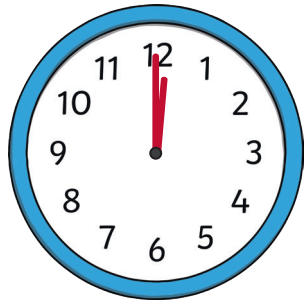
**quarter
to 6**



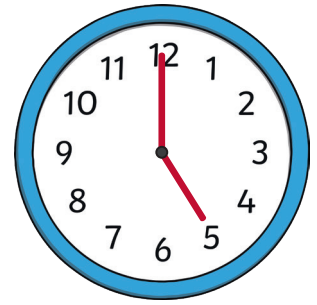
1 o'clock



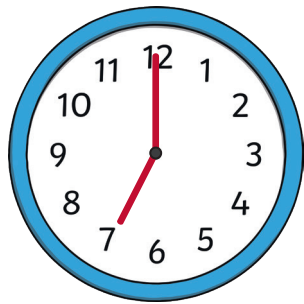
1 o'clock



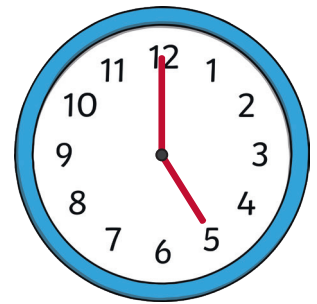
**20
minutes
to 9**



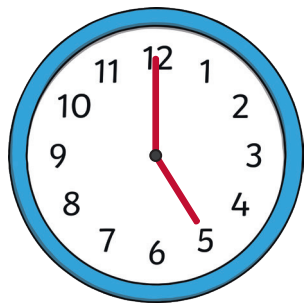
**10
minutes
to 4**



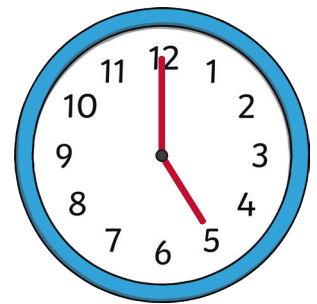
1 o'clock



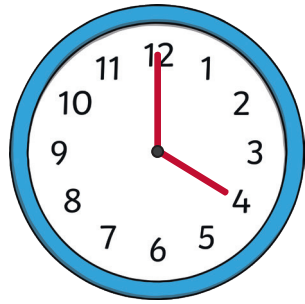
1 o'clock



**25
minutes
to 11**

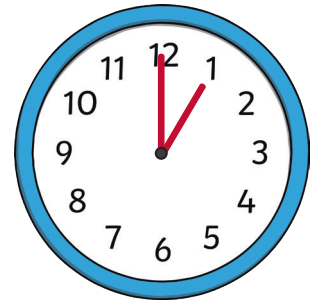


**Quarter
past 12**



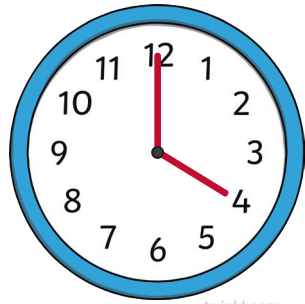
twinkl.com

1 o'clock




twinkl.com

3 o'clock



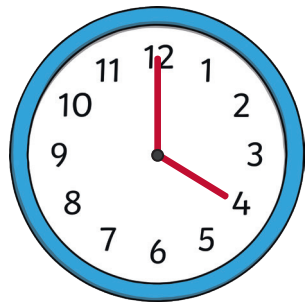
twinkl.com

3 o'clock



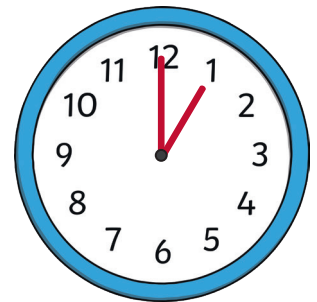
twinkl.com

**20
minutes
past 5**



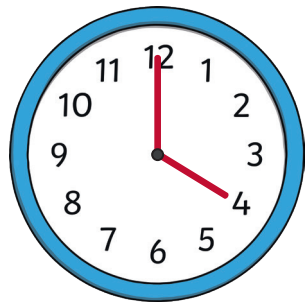
twinkl.com

**5 minutes
past 10**



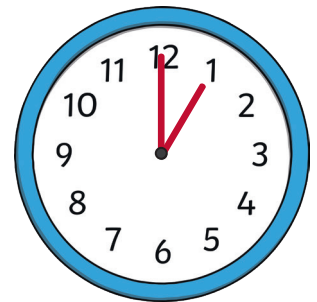
twinkl.com

3 o'clock



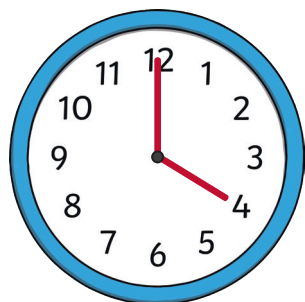
twinkl.com

**quarter
past 6**



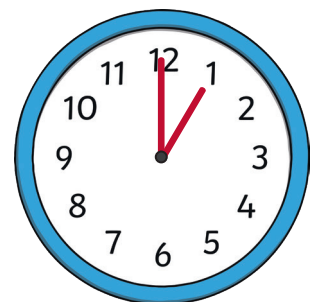
twinkl.com

**20
minutes
past 7**



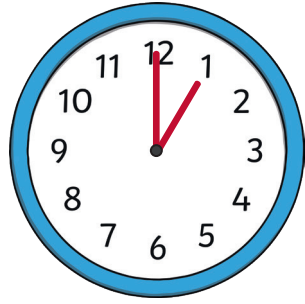
twinkl.com

3 o'clock

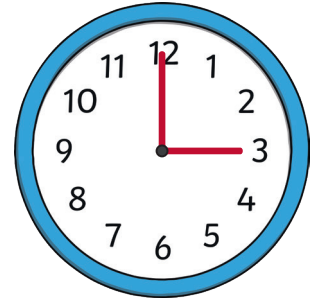


twinkl.com

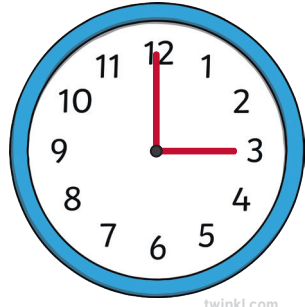
**25
minutes
past 3**



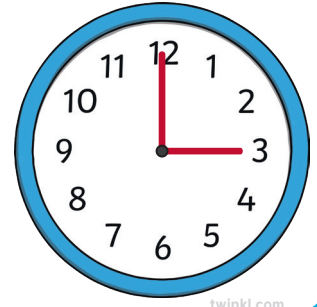
**10
minutes
to 2**



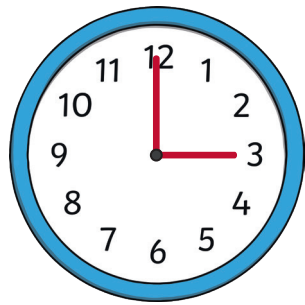
7 o'clock



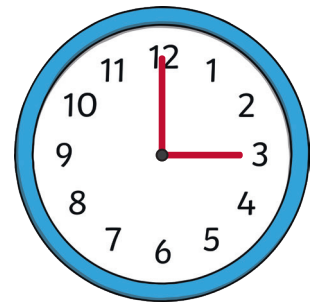
12 o'clock



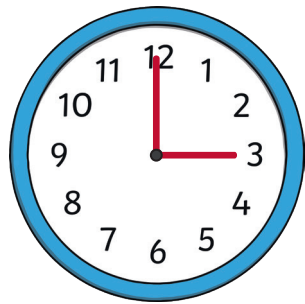
**Half
past 4**



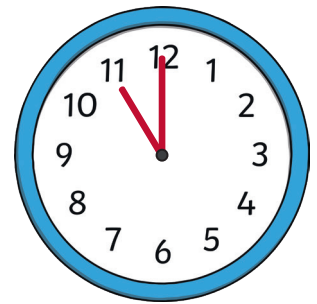
**25
minutes
to 3**



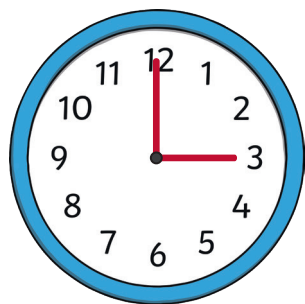
3 o'clock



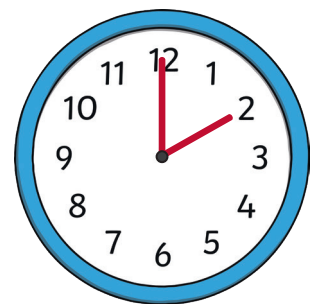
**20
minutes
to 7**



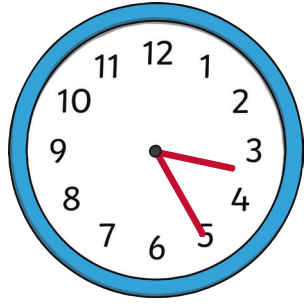
**10
minutes
past 1**



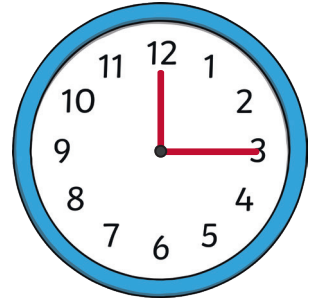
5 o'clock



6 o'clock



25 minutes past 3



Quarter to 8



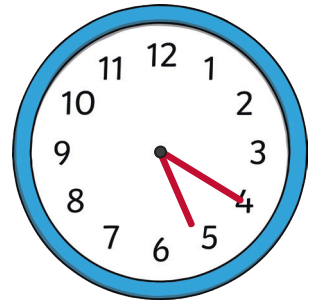
10 minutes past 8



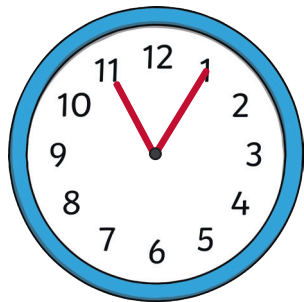
12 o'clock



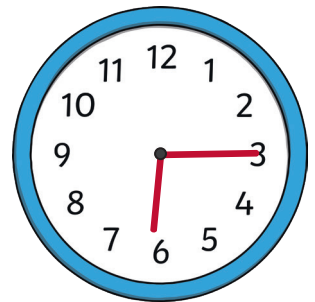
half past 4



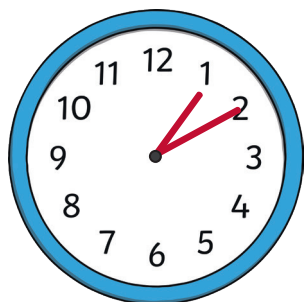
7 o'clock



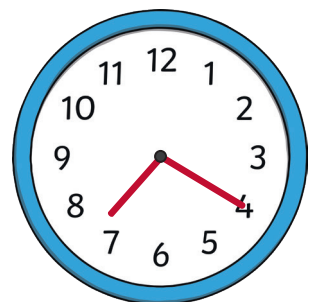
5 minutes past 11



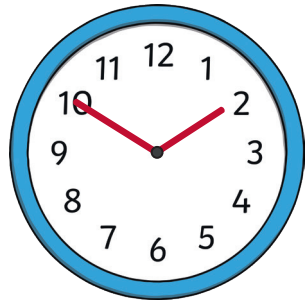
2 o'clock



10 minutes past 1

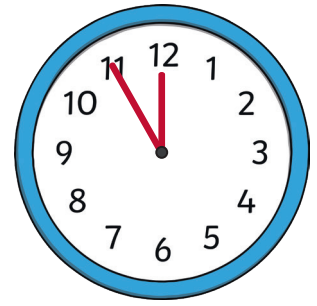


7 o'clock



twinkl.com

7 o'clock



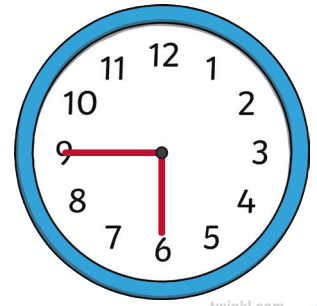
twinkl.com

**5 minutes
past 11**



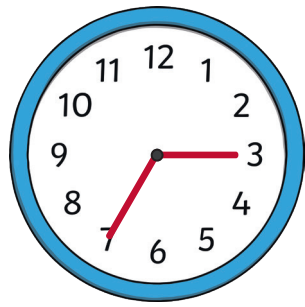
twinkl.com

**5 minutes
to 5**



twinkl.com

7 o'clock



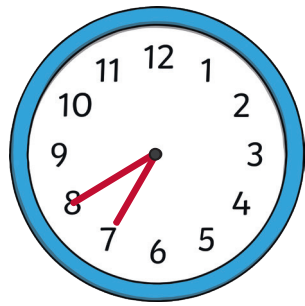
twinkl.com

3 o'clock



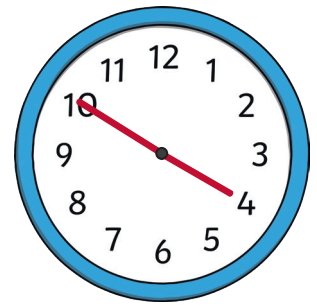
twinkl.com

**10
minutes
past 8**



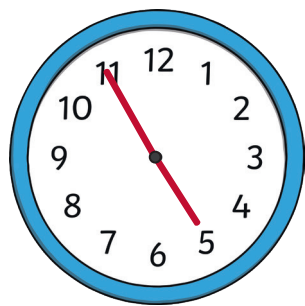
twinkl.com

11 o'clock



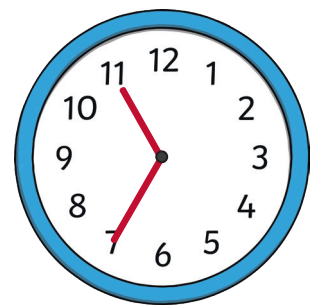
twinkl.com

5 o'clock



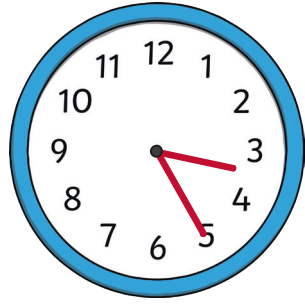
twinkl.com

3 o'clock

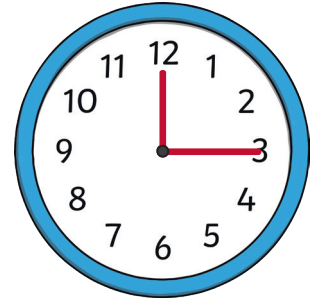


twinkl.com

**20
minutes
to 7**



**5 minutes
to 12**



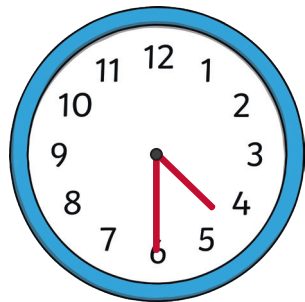
**5 minutes
to 5**



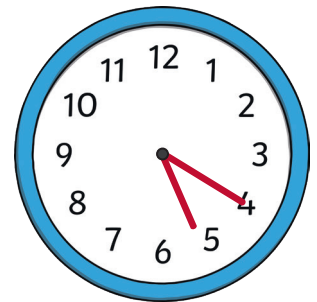
4 o'clock



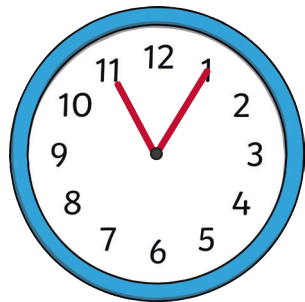
**25
minutes
to 3**



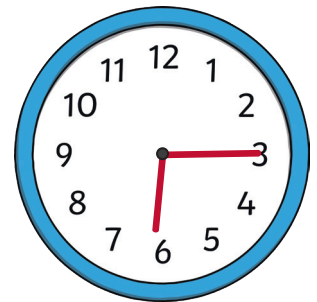
**20
minutes
to 9**



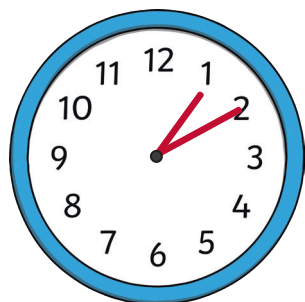
**10
minutes
to 2**



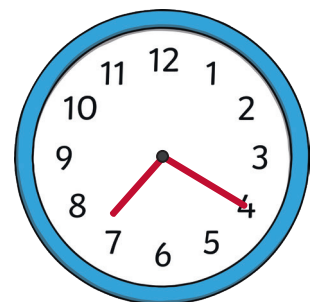
**25
minutes
to 11**



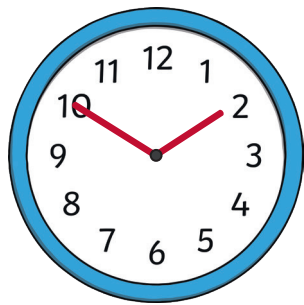
**Quarter
to 8**



**10
minutes
to 4**

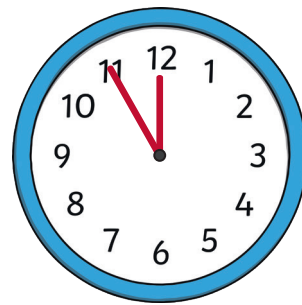


4 o'clock



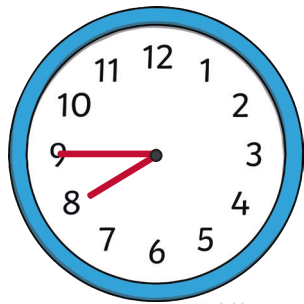
twinkl.com

Quarter past 12



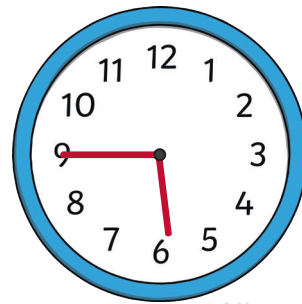
twinkl.com

quarter to 6



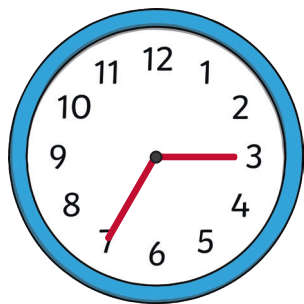
twinkl.com

4 o'clock



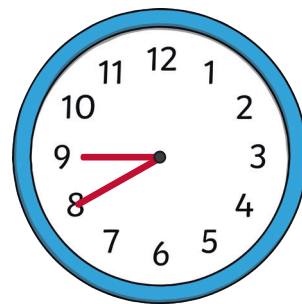
twinkl.com

5 minutes past 10



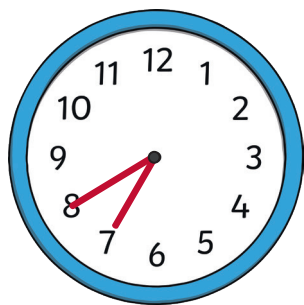
twinkl.com

20 minutes past 5



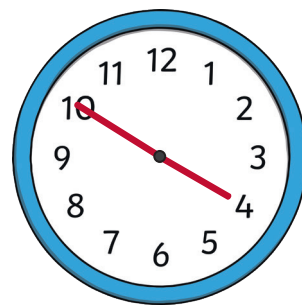
twinkl.com

4 o'clock



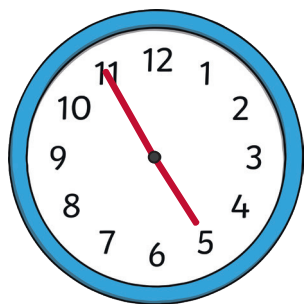
twinkl.com

4 o'clock



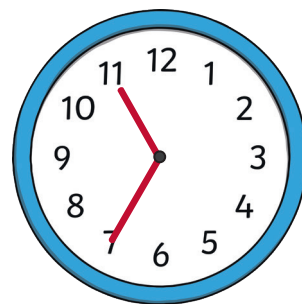
twinkl.com

Quarter past 6



twinkl.com

20 minutes past 7



twinkl.com