


# Maths Activity Booklet



# Addition and Subtraction

1. Complete these calculations mentally:

$421 + 50 = \underline{\hspace{2cm}}$

$376 + 200 = \underline{\hspace{2cm}}$

$250 - 99 = \underline{\hspace{2cm}}$

2. Complete these calculations:

	1	3	5	7
+	2	6	4	1

	3	5	9	2
+	4	2	3	8

	7	9	8	5
-	1	3	4	2

	5	3	1	9
-	3	2	6	7

3. Complete these calculations:

$3410 + \underline{\hspace{2cm}} = 5655$

$6720 - \underline{\hspace{2cm}} = 5220$

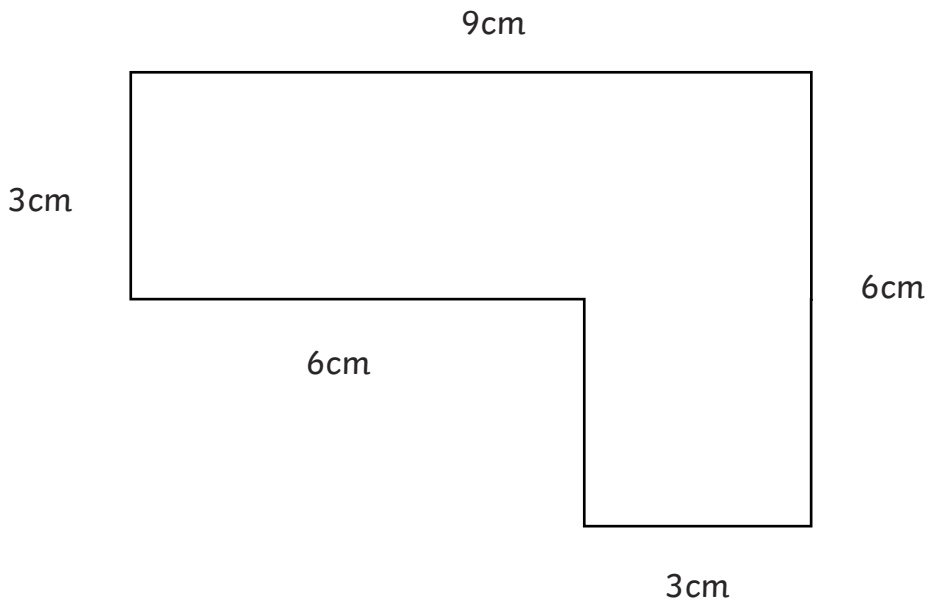
4. Use appropriate calculations to solve these problems.

a) At a cinema, there is room for 750 people in a screen. If the cinema sells 641 tickets for a screen, how many are left? \_\_\_\_\_


b) In one day, 2345 people visit the cinema. 1032 of them go and see an action film and the others go and see a comedy. How many people went to see the comedy? \_\_\_\_\_

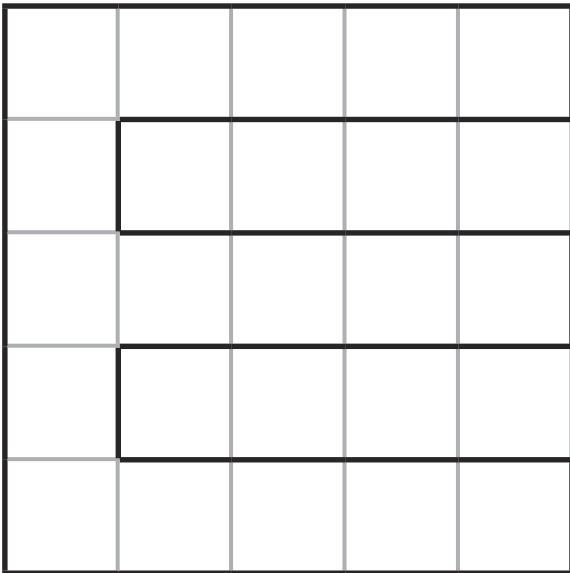

# Area and Perimeter

1. Calculate the perimeter of this shape.



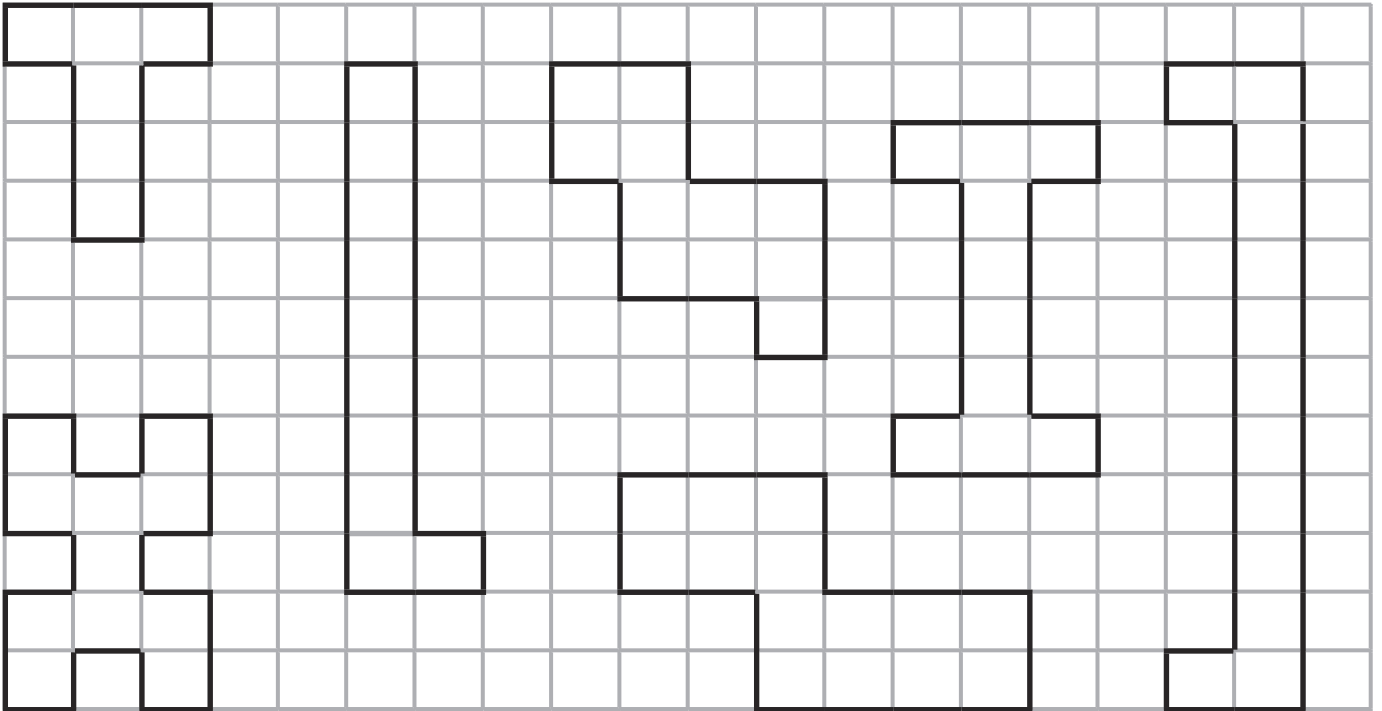
Perimeter = \_\_\_\_\_ cm

2. What is the area of this shape?



Area = \_\_\_\_\_  $\text{cm}^2$

3. Which of these shapes has the largest area? Circle the shape below.



# Addition and Subtraction Answers

1. Complete these calculations mentally:

$$421 + 50 = \mathbf{471}$$

$$376 + 200 = \mathbf{576}$$

$$250 - 99 = \mathbf{151}$$

2. Complete these calculations:

$$\begin{array}{r} 1\ 3\ 5\ 7 \\ +\ 2\ 6\ 4\ 1 \\ \hline \mathbf{3\ 9\ 9\ 8} \end{array}$$

$$\begin{array}{r} 3\ 5\ 9\ 2 \\ +\ 4\ 2\ 3\ 8 \\ \hline \mathbf{7\ 8\ 3\ 0} \\ \mathbf{1\ 1} \end{array}$$

$$\begin{array}{r} 7\ 9\ 8\ 5 \\ -\ 1\ 3\ 4\ 2 \\ \hline \mathbf{6\ 6\ 4\ 3} \end{array}$$

$$\begin{array}{r} 5\ \overset{2}{\cancel{7}}\ \overset{1}{1}\ 9 \\ -\ 3\ 2\ 6\ 7 \\ \hline \mathbf{2\ 0\ 5\ 2} \end{array}$$

3. Complete these calculations:

$$3410 + \mathbf{2245} = 5655$$

$$6720 - \mathbf{1500} = 5220$$

4. Use appropriate calculations to solve these problems.

a) At a cinema, there is room for 750 people in a screen. If the cinema sells 641 tickets for a screen, how many are left?

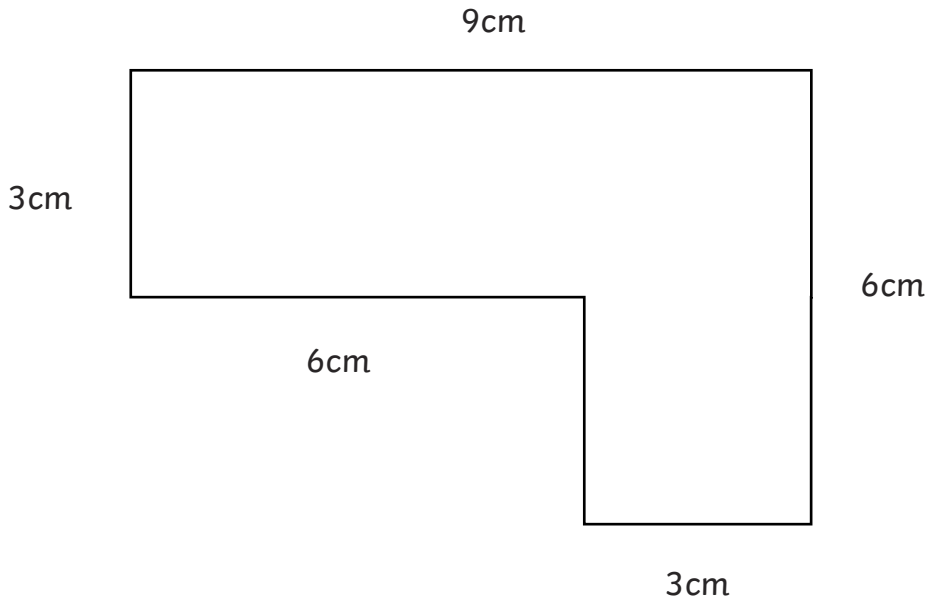
$$\mathbf{750 - 641 = 109}$$

b) In one day, 2345 people visit the cinema. 1032 of them go and see an action film and the others go and see a comedy. How many people went to see the comedy?

$$\mathbf{2345 - 1032 = 1313\ people}$$

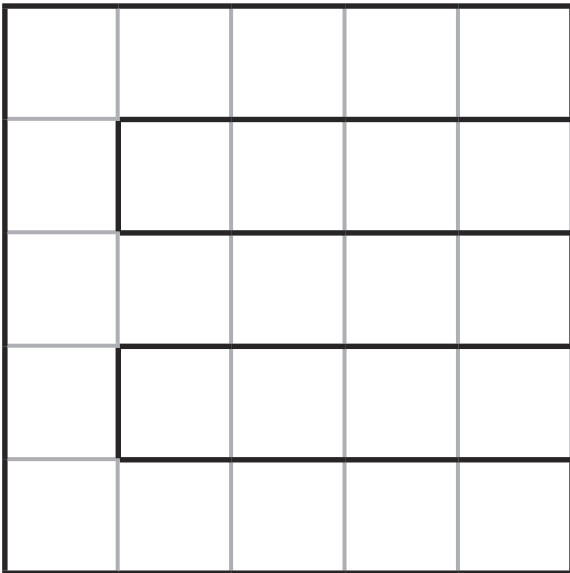
# Area and Perimeter Answers

1. Calculate the perimeter of this shape.



Perimeter = **30 cm**

2. What is the area of this shape?



Area = **17 cm<sup>2</sup>**

3. Which of these shapes has the largest area?

