

# Counting in 2s


1. Write out the numbers from 1-20 and circle all the EVEN numbers



2. Fill in the blanks:

- a. 2    4    6    8
- b. 2    4        8        12
- c. 10    12        16    18
- d. 8    10        14            20

3. Practise counting in twos with a friend (only even numbers)

4. Count these groups by going up in 2s and write down your answers





5. Count these pictures by going up in 2s and write down your answers

