

1 Complete the sentences.

a)

O	•	Tth	Hth
	•		

The tenth counters represent 0.3.

The hundredth counters represent 0.05.

tenths and hundredths make 0..

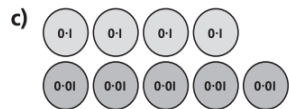
b)

O	•	Tth	Hth
	•		

The tenth counters represent .

The hundredth counters represent .

tenths and hundredths make 0..

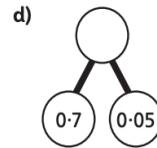
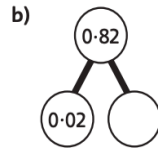
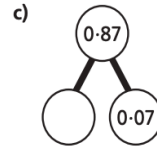
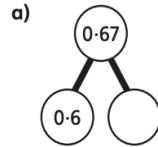


The tenth counters represent .

The hundredth counters represent .

tenths and hundredths make 0..

2 Complete the following part-whole models.



3 Complete the following expressions.

a) $0.37 = 3$ tenths and hundredths

b) $0.37 = 2$ tenths and hundredths

c) $0.37 = 1$ tenth and hundredths

d) $0.37 =$ hundredths

O	•	Tth	Hth
	•		

4 Complete the following.

a) $0.47 = 0.$ and $0.$

d) $0.51 = 0.$ and $0.$

b) 0.3 and $0.05 =$

e) 0.09 and $0.3 =$

c) 0.4 and = $0.$

f) 0.3 = $0.$ and 0.07

5 Luis has the following place value counters.



He writes the number as 0.63.

Do you agree or disagree with Luis? Explain your answer.

6 Lee has the following place value counters. He adds them to a place value grid one by one. What number is represented after each counter is added?