










Week 10 Lesson 5 – Apply













*TIP: Which column or row gives you the most information/has the least shapes?
Once you have worked out the value of one shape, write its value on top of the shape.*

Puzzle A

			24
			30
			25
29	24	26	













Work out the value of each shape:

Puzzle B

				21
				13
				20
14	7	21	12	

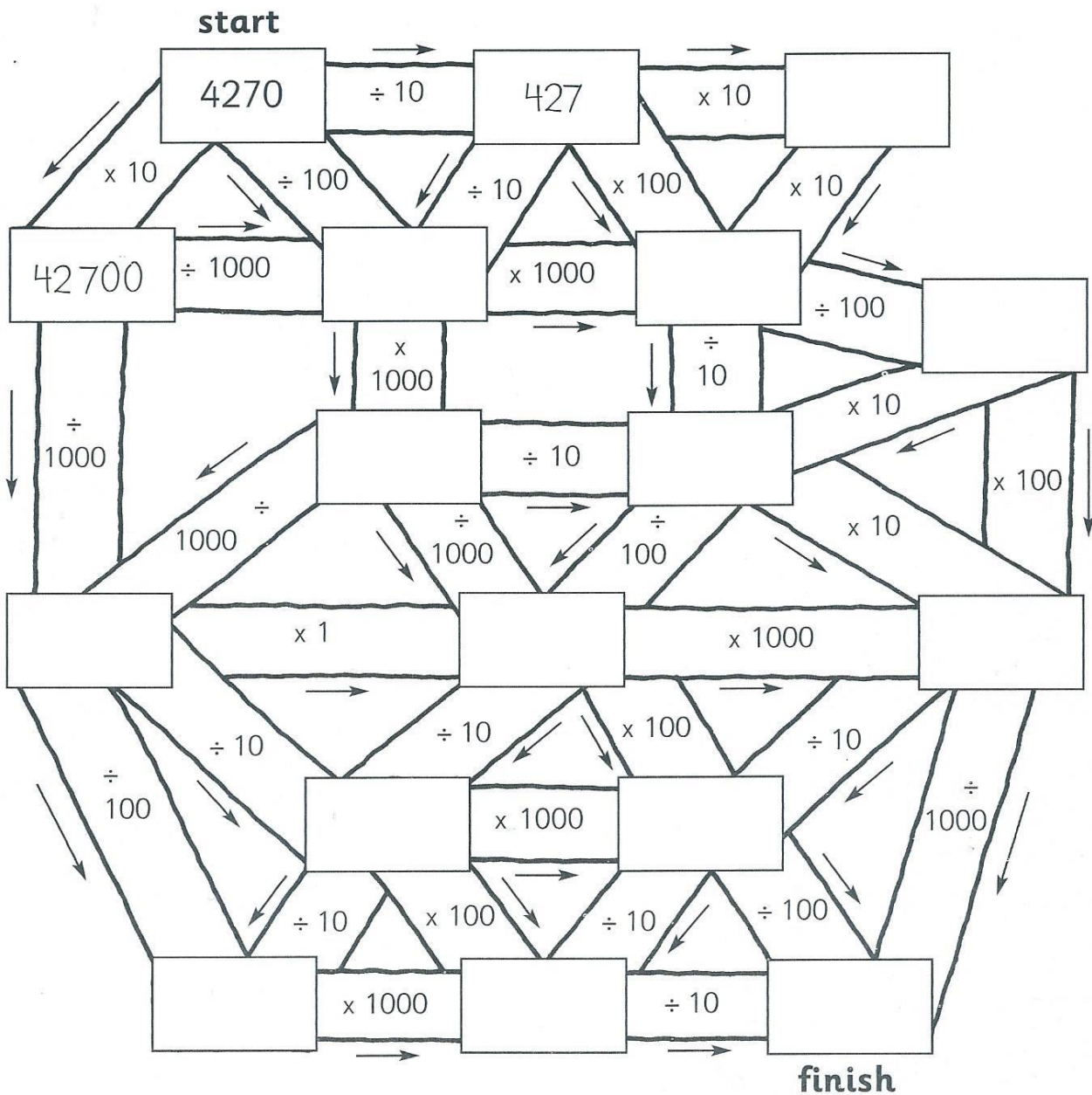
Work out the value of each shape:

Puzzle C

				35
				36
				34
27	26	25	27	

Work out the value of each shape:

- Choose a trail and follow the arrows from start to finish.
- Write the answers in the boxes on the way.
- When you reach the finish, go back to the start and try a different trail.



- Which is the largest number on this page? _____
- Which is the smallest number on this page? _____